



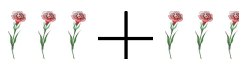

Name: \_\_\_\_\_



Date: \_\_\_\_\_



Write each sum.



 $7 + 5 =$ 


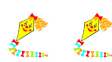
 $8 + 2 =$ 


 $3 + 3 =$ 

 $8 + 2 =$ 

 $4 + 3 =$ 

 $8 + 6 =$ 

 $3 + 2 =$ 

 $5 + 2 =$ 