


Name: _____

Date: _____

Write each sum.




$$9 + 1 =$$



$$5 + 5 =$$



$$7 + 2 =$$



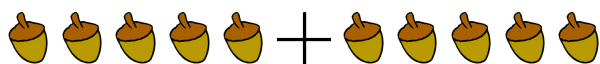
$$7 + 4 =$$



$$5 + 3 =$$



$$9 + 6 =$$



$$5 + 5 =$$



$$3 + 3 =$$