







Name: _____



Date: _____

Write each sum.



 4 $+$  3 $=$



 6 $+$  3 $=$



 8 $+$  3 $=$

 5 $+$  3 $=$

 8 $+$  3 $=$

 5 $+$  3 $=$

 3 $+$  3 $=$

 7 $+$  3 $=$