

Name: _____

Date: _____

1 less, 1 more, 10 more and 10 less

Write 1 less / 1 more horizontal and 10 less / 10 more vertical.

1.

	63	

2.

	59	

3.

	75	

4.

	83	

5.

	74	

6.

	44	

7.

	71	

8.

	65	

9.

	77	

10.

	68	

11.

	82	

12.

	56	

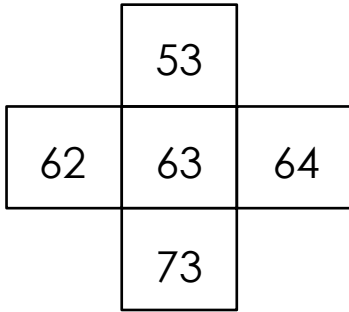
Name: _____

Date: _____

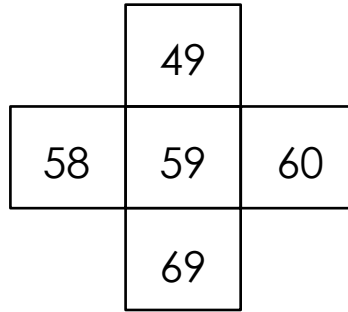
1 less, 1 more, 10 more and 10 less

Write 1 less / 1 more horizontal and 10 less / 10 more vertical.

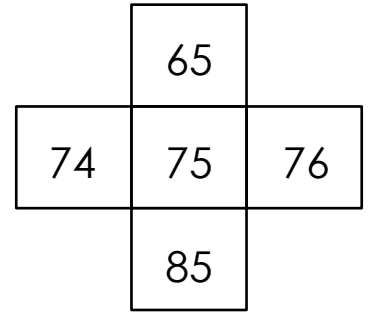
1.



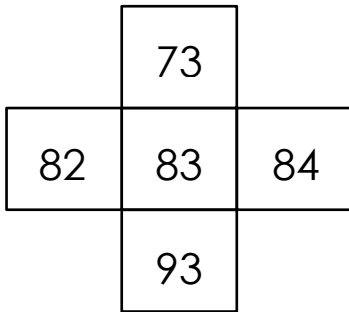
2.



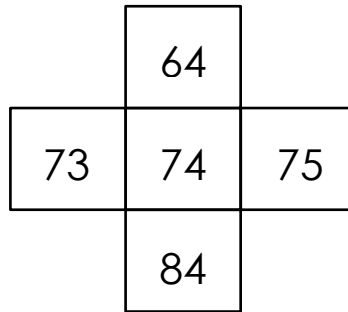
3.



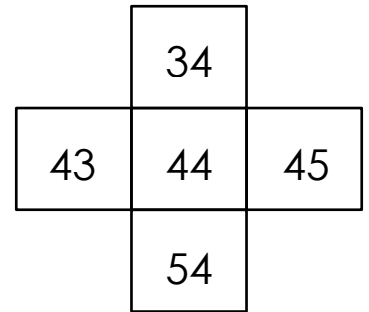
4.



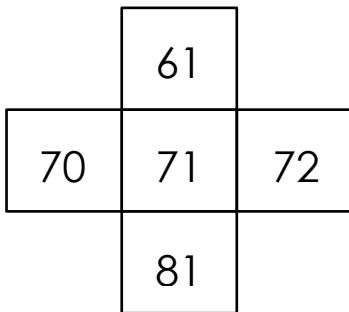
5.



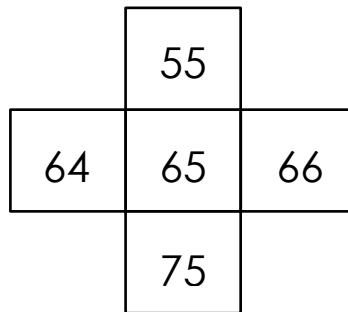
6.



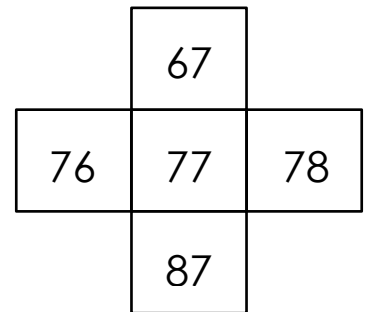
7.



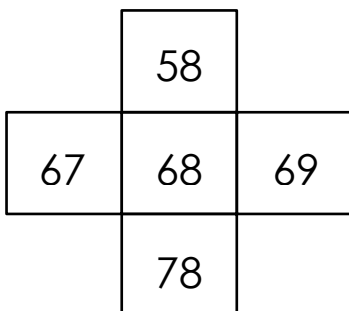
8.



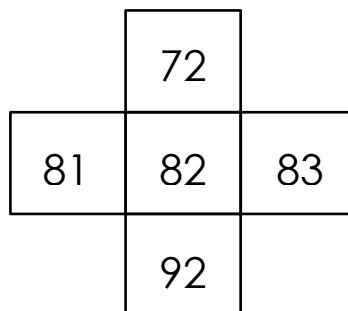
9.



10.



11.



12.

