

Name: \_\_\_\_\_


Date: \_\_\_\_\_

## Add and Compare

Solve the problems, then compare the answers and write  $>$ ,  $<$  or  $=$  in the circle.

1.


$$\begin{array}{r} 2 \\ + 1 \\ \hline 3 \end{array}$$



$$\begin{array}{r} 2 \\ + 3 \\ \hline 5 \end{array}$$

5.


$$\begin{array}{r} 2 \\ + 4 \\ \hline \end{array}$$



$$\begin{array}{r} 5 \\ + 4 \\ \hline \end{array}$$

2.


$$\begin{array}{r} 7 \\ + 4 \\ \hline \end{array}$$



$$\begin{array}{r} 2 \\ + 5 \\ \hline \end{array}$$

6.


$$\begin{array}{r} 4 \\ + 7 \\ \hline \end{array}$$



$$\begin{array}{r} 1 \\ + 5 \\ \hline \end{array}$$

3.


$$\begin{array}{r} 7 \\ + 2 \\ \hline \end{array}$$



$$\begin{array}{r} 6 \\ + 1 \\ \hline \end{array}$$

7.


$$\begin{array}{r} 0 \\ + 5 \\ \hline \end{array}$$



$$\begin{array}{r} 5 \\ + 2 \\ \hline \end{array}$$

4.


$$\begin{array}{r} 2 \\ + 4 \\ \hline \end{array}$$



$$\begin{array}{r} 1 \\ + 7 \\ \hline \end{array}$$

8.

$$\begin{array}{r} 3 \\ + 3 \\ \hline \end{array}$$



$$\begin{array}{r} 2 \\ + 4 \\ \hline \end{array}$$

Name: \_\_\_\_\_

Date: \_\_\_\_\_

## Add and Compare

Solve each problem and write  $>$ ,  $<$  or  $=$  in the circle.

1.

$$\begin{array}{r} 2 \\ + 1 \\ \hline 3 \end{array} \quad \bigcirc \quad \begin{array}{r} 2 \\ + 3 \\ \hline 5 \end{array}$$

5.

$$\begin{array}{r} 2 \\ + 4 \\ \hline 6 \end{array} \quad \bigcirc \quad \begin{array}{r} 5 \\ + 4 \\ \hline 9 \end{array}$$

2.

$$\begin{array}{r} 7 \\ + 4 \\ \hline 11 \end{array} \quad \bigcirc \quad \begin{array}{r} 2 \\ + 5 \\ \hline 7 \end{array}$$

6.

$$\begin{array}{r} 4 \\ + 7 \\ \hline 11 \end{array} \quad \bigcirc \quad \begin{array}{r} 1 \\ + 5 \\ \hline 6 \end{array}$$

3.

$$\begin{array}{r} 7 \\ + 2 \\ \hline 9 \end{array} \quad \bigcirc \quad \begin{array}{r} 6 \\ + 1 \\ \hline 7 \end{array}$$

7.

$$\begin{array}{r} 0 \\ + 5 \\ \hline 5 \end{array} \quad \bigcirc \quad \begin{array}{r} 5 \\ + 2 \\ \hline 7 \end{array}$$

4.

$$\begin{array}{r} 2 \\ + 4 \\ \hline 6 \end{array} \quad \bigcirc \quad \begin{array}{r} 1 \\ + 7 \\ \hline 8 \end{array}$$

8.

$$\begin{array}{r} 3 \\ + 3 \\ \hline 6 \end{array} \quad \bigcirc \quad \begin{array}{r} 2 \\ + 4 \\ \hline 6 \end{array}$$