

Name: _____


Date: _____

Add and Compare

Solve the problems, then compare the answers and write $>$, $<$ or $=$ in the circle.

1.


$$\begin{array}{r} 22 \\ + 61 \\ \hline 83 \end{array}$$



$$\begin{array}{r} 72 \\ + 21 \\ \hline 93 \end{array}$$

5.


$$\begin{array}{r} 12 \\ + 13 \\ \hline \end{array}$$



$$\begin{array}{r} 15 \\ + 14 \\ \hline \end{array}$$

2.


$$\begin{array}{r} 17 \\ + 24 \\ \hline \end{array}$$



$$\begin{array}{r} 22 \\ + 33 \\ \hline \end{array}$$

6.


$$\begin{array}{r} 10 \\ + 37 \\ \hline \end{array}$$



$$\begin{array}{r} 21 \\ + 15 \\ \hline \end{array}$$

3.


$$\begin{array}{r} 37 \\ + 29 \\ \hline \end{array}$$



$$\begin{array}{r} 18 \\ + 29 \\ \hline \end{array}$$

7.


$$\begin{array}{r} 40 \\ + 25 \\ \hline \end{array}$$



$$\begin{array}{r} 35 \\ + 31 \\ \hline \end{array}$$

4.


$$\begin{array}{r} 29 \\ + 24 \\ \hline \end{array}$$



$$\begin{array}{r} 41 \\ + 17 \\ \hline \end{array}$$

8.

$$\begin{array}{r} 30 \\ + 42 \\ \hline \end{array}$$



$$\begin{array}{r} 44 \\ + 28 \\ \hline \end{array}$$

Name: _____

Date: _____

Add and Compare

Solve each problem and write $>$, $<$ or $=$ in the circle.

1.

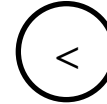
$$\begin{array}{r} 22 \\ + 61 \\ \hline 83 \end{array}$$



$$\begin{array}{r} 72 \\ + 21 \\ \hline 93 \end{array}$$

5.

$$\begin{array}{r} 12 \\ + 13 \\ \hline 25 \end{array}$$



$$\begin{array}{r} 15 \\ + 14 \\ \hline 29 \end{array}$$

2.

$$\begin{array}{r} 17 \\ + 24 \\ \hline 83 \end{array}$$



$$\begin{array}{r} 22 \\ + 33 \\ \hline 55 \end{array}$$

6.

$$\begin{array}{r} 10 \\ + 37 \\ \hline 47 \end{array}$$



$$\begin{array}{r} 21 \\ + 15 \\ \hline 36 \end{array}$$

3.

$$\begin{array}{r} 37 \\ + 29 \\ \hline 66 \end{array}$$



$$\begin{array}{r} 18 \\ + 29 \\ \hline 47 \end{array}$$

7.

$$\begin{array}{r} 40 \\ + 25 \\ \hline 65 \end{array}$$



$$\begin{array}{r} 35 \\ + 31 \\ \hline 66 \end{array}$$

4.

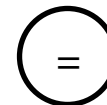
$$\begin{array}{r} 29 \\ + 24 \\ \hline 53 \end{array}$$



$$\begin{array}{r} 41 \\ + 17 \\ \hline 58 \end{array}$$

8.

$$\begin{array}{r} 30 \\ + 42 \\ \hline 72 \end{array}$$



$$\begin{array}{r} 44 \\ + 28 \\ \hline 72 \end{array}$$