

Name: _____


Date: _____

Add and Compare

Solve the problems, then compare the answers and write $>$, $<$ or $=$ in the circle.

1.


$$\begin{array}{r} 10 \\ + 11 \\ \hline \end{array}$$



$$\begin{array}{r} 14 \\ + 23 \\ \hline \end{array}$$

5.


$$\begin{array}{r} 24 \\ + 12 \\ \hline \end{array}$$



$$\begin{array}{r} 25 \\ + 10 \\ \hline \end{array}$$

2.


$$\begin{array}{r} 13 \\ + 14 \\ \hline \end{array}$$



$$\begin{array}{r} 12 \\ + 19 \\ \hline \end{array}$$

6.


$$\begin{array}{r} 24 \\ + 33 \\ \hline \end{array}$$



$$\begin{array}{r} 30 \\ + 27 \\ \hline \end{array}$$

3.


$$\begin{array}{r} 41 \\ + 21 \\ \hline \end{array}$$



$$\begin{array}{r} 38 \\ + 29 \\ \hline \end{array}$$

7.


$$\begin{array}{r} 44 \\ + 22 \\ \hline \end{array}$$



$$\begin{array}{r} 22 \\ + 37 \\ \hline \end{array}$$

4.


$$\begin{array}{r} 32 \\ + 13 \\ \hline \end{array}$$



$$\begin{array}{r} 24 \\ + 21 \\ \hline \end{array}$$

8.

$$\begin{array}{r} 35 \\ + 46 \\ \hline \end{array}$$



$$\begin{array}{r} 42 \\ + 29 \\ \hline \end{array}$$

Name: _____

Date: _____

Add and Compare

Solve each problem and write >, < or = in the circle.

1.

$$\begin{array}{r} 10 \\ + 11 \\ \hline 22 \end{array}$$

<

$$\begin{array}{r} 14 \\ + 23 \\ \hline 37 \end{array}$$

5.

$$\begin{array}{r} 24 \\ + 12 \\ \hline 36 \end{array}$$

>

$$\begin{array}{r} 25 \\ + 10 \\ \hline 35 \end{array}$$

2.

$$\begin{array}{r} 13 \\ + 14 \\ \hline 27 \end{array}$$

<

$$\begin{array}{r} 12 \\ + 19 \\ \hline 31 \end{array}$$

6.

$$\begin{array}{r} 24 \\ + 33 \\ \hline 57 \end{array}$$

=

$$\begin{array}{r} 30 \\ + 27 \\ \hline 57 \end{array}$$

3.

$$\begin{array}{r} 41 \\ + 21 \\ \hline 62 \end{array}$$

<

$$\begin{array}{r} 38 \\ + 29 \\ \hline 67 \end{array}$$

7.

$$\begin{array}{r} 44 \\ + 22 \\ \hline 66 \end{array}$$

>

$$\begin{array}{r} 22 \\ + 37 \\ \hline 59 \end{array}$$

4.

$$\begin{array}{r} 32 \\ + 13 \\ \hline 45 \end{array}$$

=

$$\begin{array}{r} 24 \\ + 21 \\ \hline 45 \end{array}$$

8.

$$\begin{array}{r} 35 \\ + 46 \\ \hline 81 \end{array}$$

>

$$\begin{array}{r} 42 \\ + 29 \\ \hline 71 \end{array}$$