

Name: _____


Date: _____

Add and Compare

Solve the problems, then compare the answers and write $>$, $<$ or $=$ in the circle.

1.


$$\begin{array}{r} 27 \\ + 47 \\ \hline \end{array}$$



$$\begin{array}{r} 34 \\ + 22 \\ \hline \end{array}$$

5.


$$\begin{array}{r} 64 \\ + 17 \\ \hline \end{array}$$



$$\begin{array}{r} 35 \\ + 21 \\ \hline \end{array}$$

2.


$$\begin{array}{r} 25 \\ + 25 \\ \hline \end{array}$$



$$\begin{array}{r} 32 \\ + 18 \\ \hline \end{array}$$

6.


$$\begin{array}{r} 51 \\ + 36 \\ \hline \end{array}$$



$$\begin{array}{r} 45 \\ + 37 \\ \hline \end{array}$$

3.


$$\begin{array}{r} 56 \\ + 22 \\ \hline \end{array}$$



$$\begin{array}{r} 58 \\ + 27 \\ \hline \end{array}$$

7.


$$\begin{array}{r} 37 \\ + 18 \\ \hline \end{array}$$



$$\begin{array}{r} 19 \\ + 29 \\ \hline \end{array}$$

4.


$$\begin{array}{r} 42 \\ + 25 \\ \hline \end{array}$$



$$\begin{array}{r} 22 \\ + 18 \\ \hline \end{array}$$

8.

$$\begin{array}{r} 15 \\ + 23 \\ \hline \end{array}$$



$$\begin{array}{r} 26 \\ + 12 \\ \hline \end{array}$$

Name: _____

Date: _____

Add and CompareSolve each problem and write $>$, $<$ or $=$ in the circle.

1.

$$\begin{array}{r} 27 \\ + 47 \\ \hline 74 \end{array}$$

 $>$

$$\begin{array}{r} 34 \\ + 22 \\ \hline 56 \end{array}$$

5.

$$\begin{array}{r} 64 \\ + 17 \\ \hline 81 \end{array}$$

 $>$

$$\begin{array}{r} 35 \\ + 21 \\ \hline 56 \end{array}$$

2.

$$\begin{array}{r} 25 \\ + 25 \\ \hline 50 \end{array}$$

 $=$

$$\begin{array}{r} 32 \\ + 18 \\ \hline 50 \end{array}$$

6.

$$\begin{array}{r} 51 \\ + 36 \\ \hline 87 \end{array}$$

 $>$

$$\begin{array}{r} 45 \\ + 37 \\ \hline 82 \end{array}$$

3.

$$\begin{array}{r} 56 \\ + 22 \\ \hline 78 \end{array}$$

 $<$

$$\begin{array}{r} 58 \\ + 27 \\ \hline 85 \end{array}$$

7.

$$\begin{array}{r} 37 \\ + 18 \\ \hline 55 \end{array}$$

 $>$

$$\begin{array}{r} 19 \\ + 29 \\ \hline 48 \end{array}$$

4.

$$\begin{array}{r} 42 \\ + 25 \\ \hline 67 \end{array}$$

 $>$

$$\begin{array}{r} 22 \\ + 18 \\ \hline 40 \end{array}$$

8.

$$\begin{array}{r} 15 \\ + 23 \\ \hline 38 \end{array}$$

 $=$

$$\begin{array}{r} 26 \\ + 12 \\ \hline 38 \end{array}$$