

Name: _____


Date: _____

Add and Compare

Solve the problems, then compare the answers and write $>$, $<$ or $=$ in the circle.

1.


$$\begin{array}{r} 20 \\ + 34 \\ \hline \end{array}$$



$$\begin{array}{r} 24 \\ + 36 \\ \hline \end{array}$$

5.


$$\begin{array}{r} 35 \\ + 25 \\ \hline \end{array}$$



$$\begin{array}{r} 33 \\ + 21 \\ \hline \end{array}$$

2.


$$\begin{array}{r} 15 \\ + 27 \\ \hline \end{array}$$



$$\begin{array}{r} 32 \\ + 14 \\ \hline \end{array}$$

6.


$$\begin{array}{r} 41 \\ + 31 \\ \hline \end{array}$$



$$\begin{array}{r} 35 \\ + 37 \\ \hline \end{array}$$

3.


$$\begin{array}{r} 64 \\ + 39 \\ \hline \end{array}$$



$$\begin{array}{r} 59 \\ + 37 \\ \hline \end{array}$$

7.


$$\begin{array}{r} 72 \\ + 39 \\ \hline \end{array}$$



$$\begin{array}{r} 48 \\ + 38 \\ \hline \end{array}$$

4.


$$\begin{array}{r} 67 \\ + 27 \\ \hline \end{array}$$



$$\begin{array}{r} 54 \\ + 40 \\ \hline \end{array}$$

8.

$$\begin{array}{r} 38 \\ + 29 \\ \hline \end{array}$$



$$\begin{array}{r} 37 \\ + 44 \\ \hline \end{array}$$

Name: _____


Date: _____

Add and Compare

Solve each problem and write $>$, $<$ or $=$ in the circle.

1.

$$\begin{array}{r} 20 \\ + 34 \\ \hline 54 \end{array}$$



$$\begin{array}{r} 24 \\ + 36 \\ \hline 60 \end{array}$$

5.

$$\begin{array}{r} 35 \\ + 25 \\ \hline 60 \end{array}$$



$$\begin{array}{r} 33 \\ + 21 \\ \hline 54 \end{array}$$

2.

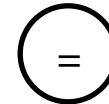
$$\begin{array}{r} 15 \\ + 27 \\ \hline 42 \end{array}$$



$$\begin{array}{r} 32 \\ + 14 \\ \hline 46 \end{array}$$

6.

$$\begin{array}{r} 41 \\ + 31 \\ \hline 72 \end{array}$$



$$\begin{array}{r} 35 \\ + 37 \\ \hline 72 \end{array}$$

3.

$$\begin{array}{r} 64 \\ + 39 \\ \hline 103 \end{array}$$



$$\begin{array}{r} 59 \\ + 37 \\ \hline 96 \end{array}$$

7.

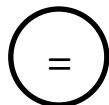
$$\begin{array}{r} 72 \\ + 39 \\ \hline 111 \end{array}$$



$$\begin{array}{r} 48 \\ + 38 \\ \hline 86 \end{array}$$

4.

$$\begin{array}{r} 67 \\ + 27 \\ \hline 94 \end{array}$$



$$\begin{array}{r} 54 \\ + 40 \\ \hline 94 \end{array}$$

8.

$$\begin{array}{r} 38 \\ + 29 \\ \hline 67 \end{array}$$



$$\begin{array}{r} 37 \\ + 44 \\ \hline 81 \end{array}$$