





Name: \_\_\_\_\_



Date: \_\_\_\_\_

Write each sum.



 $9 + 3 =$ 



 $7 + 4 =$ 


 $9 + 3 =$ 

 $5 + 4 =$ 

 $3 + 4 =$ 

 $4 + 2 =$ 

 $7 + 3 =$ 

 $7 + 4 =$ 