

# Bar Graph






Name: \_\_\_\_\_

Date: \_\_\_\_\_

A School took a survey on the number of musical instrument brought by the students and recorded the data. Answer the questions using bar graph.



Fill the blanks using bar graph:

1)					

- 2) If 50 more bugles brought by students, \_\_\_\_\_ rank would the flute is.
- 3) \_\_\_\_\_ Is the sum of all the musical instruments brought by students?
- 4) Did the students bring odd or even number of guitar? \_\_\_\_\_
- 5) Write the names of musical instruments, from most brought to least brought by the students.  
\_\_\_\_\_
- 6) How many more pianos than banjos were brought?
 

☐ 100  
☐ 80

☐ 60  
☐ 40

# Bar Graph






Name: \_\_\_\_\_

Date: \_\_\_\_\_

A School took a survey on the number of musical instrument brought by the students and recorded the data. Answer the questions using bar graph.



Fill the blanks using bar graph:

1)					
	80	200	140	180	120

- 2) If 50 more bugles brought by students, Third rank would the flute is.
- 3) 720 Is the sum of all the musical instruments brought by students?
- 4) Did the students bring odd or even number of guitar? Even
- 5) Write the names of musical instruments, from most brought to least brought by the students.  
Piano, Flute, Bugle, Banjo, Guitar
- 6) How many more pianos than banjos were brought?
 

☐ 100  
☒ 80

☐ 60  
☐ 40