





Bar Graph


Name: _____

Date: _____

A shopkeeper asked people at the bakery which food items they liked. They recorded the results in the bar graph below. Use their graph to answer the questions.



Types of items	Tally marks	Numbers
 pizza		
 cake		
 burger		
 French fries		
 sandwich		



- 1) How many people liked French fries?

- 2) How many more people liked sandwich than burger?

- 3) Which three bakery items are equally liked?

- 4) Which bakery item is least liked by people?

- 5) Did more people like cake or French fries?






Bar Graph


Name: _____

Date: _____

A shopkeeper asked people at the bakery which food items they liked. They recorded the results in the bar graph below. Use their graph to answer the questions.



Types of items	Tally marks	Numbers
 pizza		8
 cake		8
 burger		7
 French fries		6
 sandwich		8



- 1) How many people liked French fries?
6

- 2) How many more people liked sandwich than burger?
1

- 3) Which three bakery items are equally liked?
Pizza, Cake and Sandwich

- 4) Which bakery item is least liked by people?
French fries

- 5) Did more people like cake or French fries?
Cake