







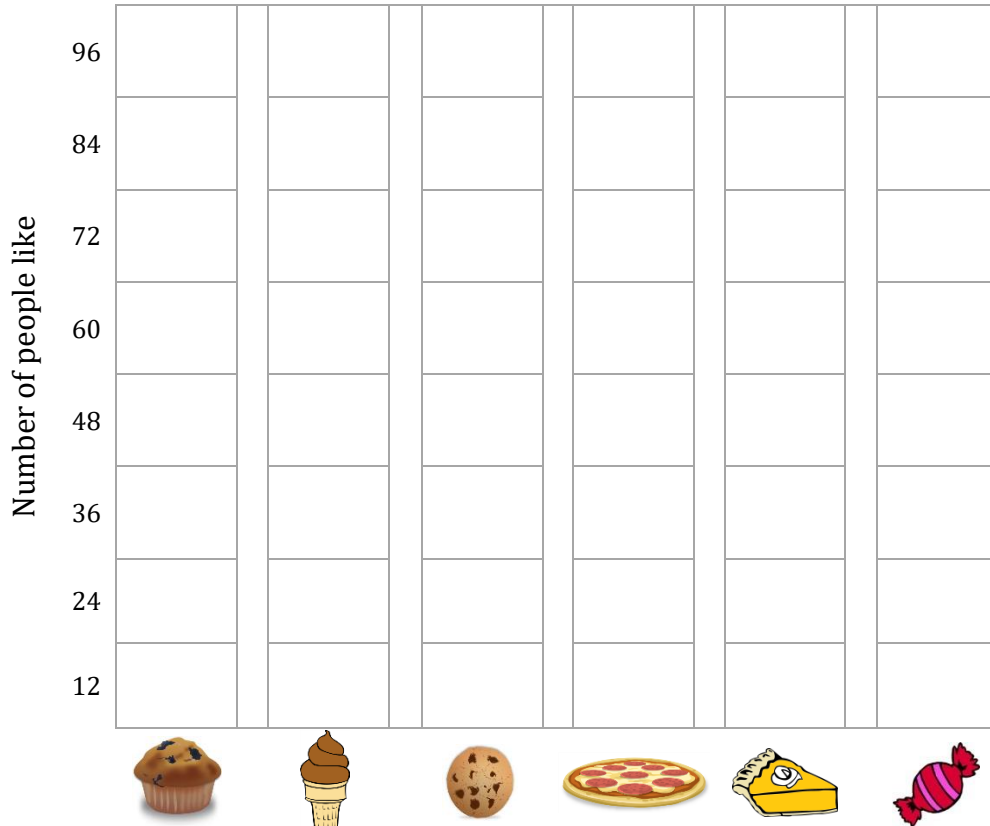
Bar Graph

Name: _____

Date: _____

Use the information below to color in the graph showing the people voted for the junk food which they liked the most. Answer the questions using bar graph.

	72 votes for Cupcakes		36 votes for Ice creams		96 votes for Chocolate chip cookie
	48 votes for Pizzas		72 votes for Pies		84 votes for Candies



- 1) Did fewer people like chocolate chip cookie or pizza?

- 2) Cupcake got more votes than the 2 least popular food items put together. True or False?

- 3) Which item did exactly 84 people say was their favorite?

- 4) Which two food items got the same number of votes?







<input type="radio"/> Cupcake, Ice cream	<input type="radio"/> Pizza, Chocolate chip cookie
<input type="radio"/> Ice cream, Candy	<input type="radio"/> Pie, Cupcake

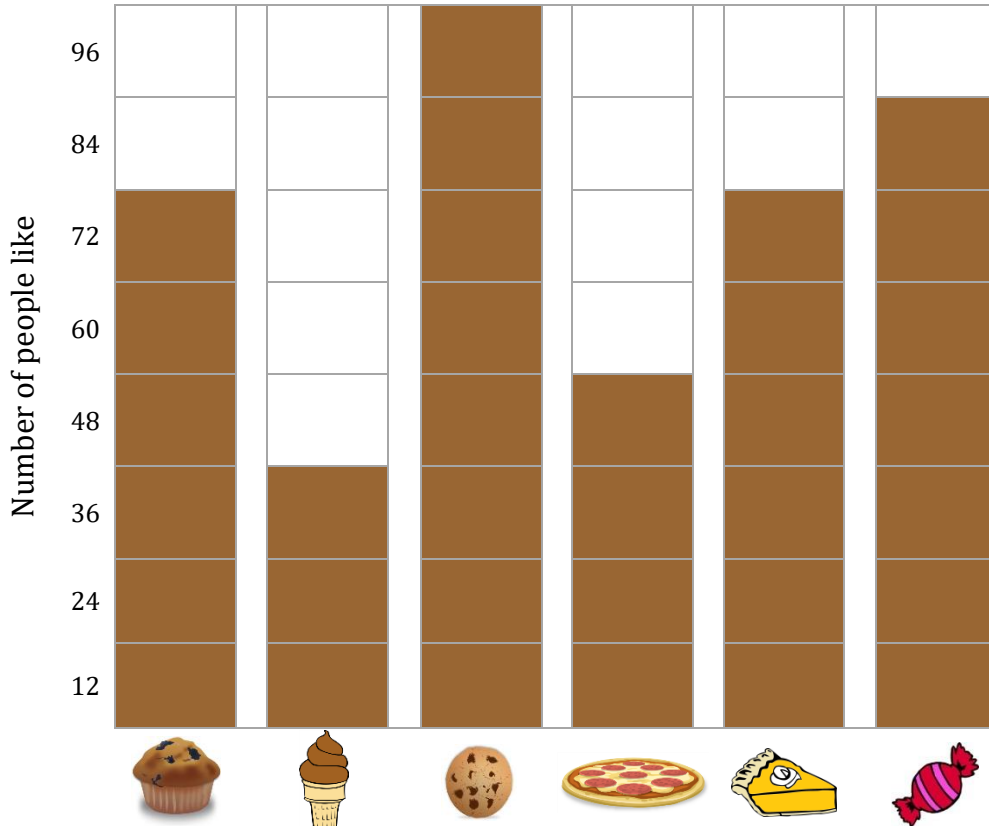
Bar Graph

Name: _____

Date: _____

Use the information below to color in the graph showing the people voted for the junk food which they liked the most. Answer the questions using bar graph.

	72 votes for Cupcakes		36 votes for Ice creams		96 votes for Chocolate chip cookie
	48 votes for Pizzas		72 votes for Pies		84 votes for Candies



- 1) Did fewer people like chocolate chip cookie or pizza?
 Pizza
- 2) Cupcake got more votes than the 2 least popular food items put together. True or False?
 False
- 3) Which item did exactly 84 people say was their favorite?
 Candy
- 4) Which two food items got the same number of votes?
 Cupcake, Ice cream Pizza, Chocolate chip cookie
 Ice cream, Candy Pie, Cupcake