







Bar Graph

Name: _____

Date: _____

Use the information below to color in the graph showing stationary items imported. Answer the question using bar graph.

	6 Erasers		30 Bags		24 Books
	48 Sharpeners		36 Pencils		18 Pens



1) How many sharpeners were imported altogether?

2) Which stationary item imported more?

3) Which were more imported bags or pencils?

4) How many erasers, sharpeners and pens were imported?

80

72

69







83

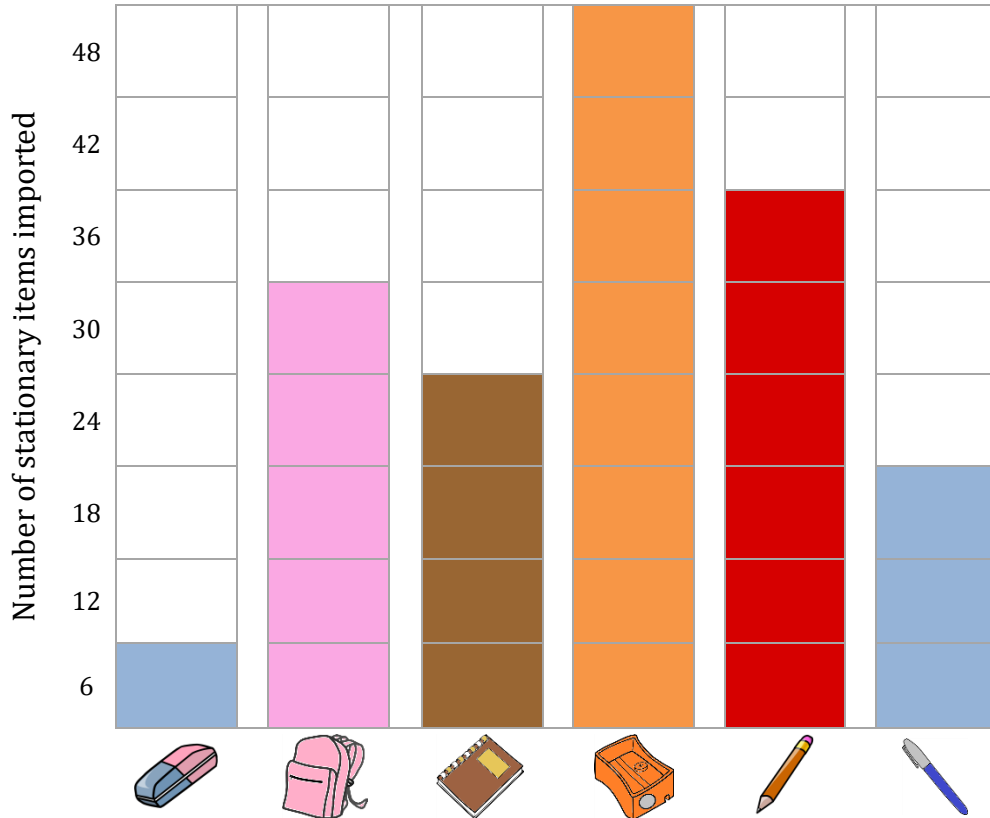
Bar Graph

Name: _____

Date: _____

Use the information below to color in the graph showing stationary items imported. Answer the question using bar graph.

	6 Erasers		30 Bags		24 Books
	48 Sharpeners		36 Pencils		18 Pens



1) How many sharpeners were imported altogether?

48

2) Which stationary item imported more?

Sharpener

3) Which were more imported bags or pencils?

Pencils

4) How many erasers, sharpeners and pens were imported?

80

72

69

83