

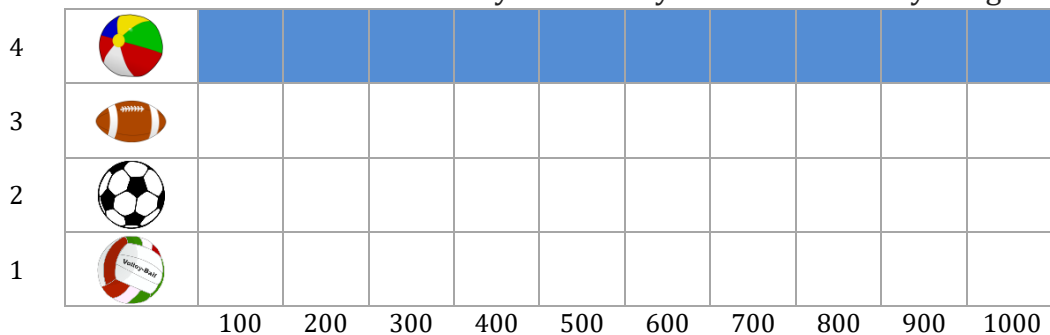
Balls Bar Graph

Name: _____

Date: _____

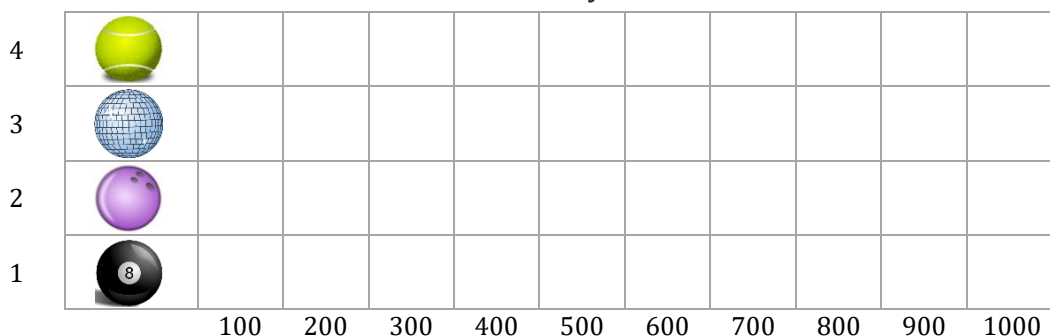
Use the bar graph to answer the questions.

Mia buys are 1000 beach balls, 400 rugby balls, 800 soccer balls and 900 volley balls for their community. How many balls does she buy altogether?



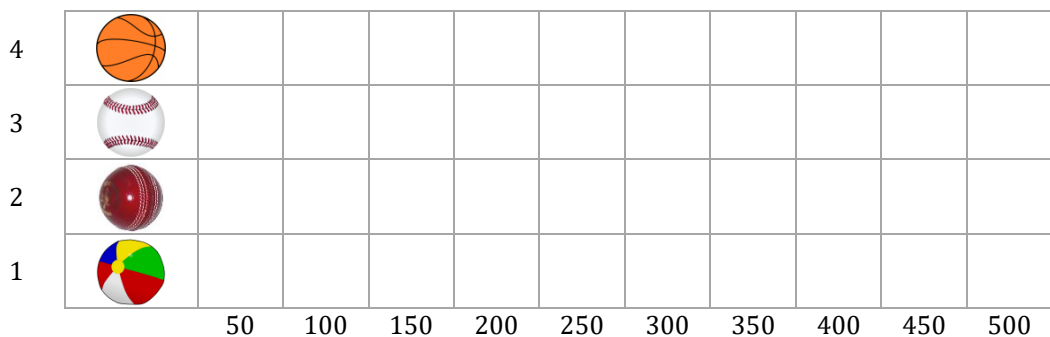
_____ Balls

There are brought 500 tennis balls, 700 disco balls, 300 bowling balls and 600 eight balls in a room. How many balls are there in the room?



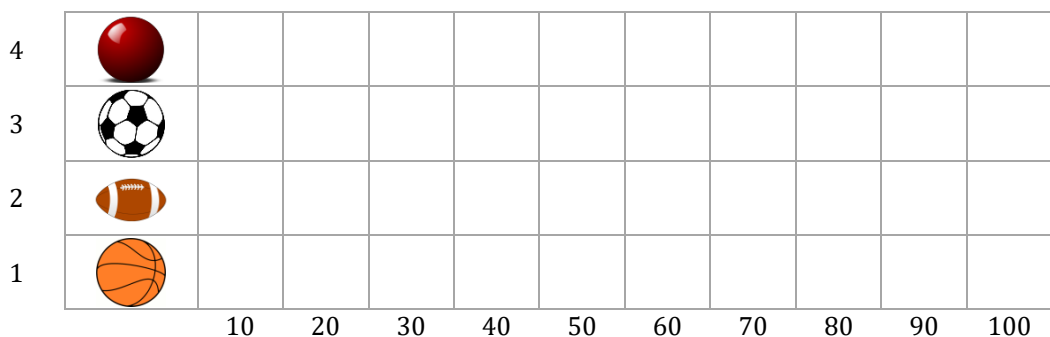
_____ Balls

Daniel brought 200 basket balls, 500 base balls, 150 cricket balls and 350 beach balls. How many balls did he bring altogether?



_____ Balls

Emily brought 90 red snooker balls, Evan brought 50 soccer balls, Ryan brought 80 rugby balls and Luke brought 60 basket balls. How many balls did they bring altogether?



_____ Balls

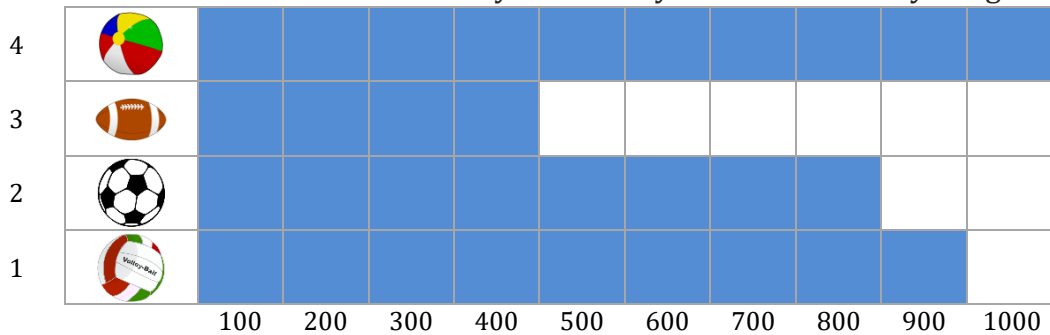
Balls Bar Graph

Name: _____

Date: _____

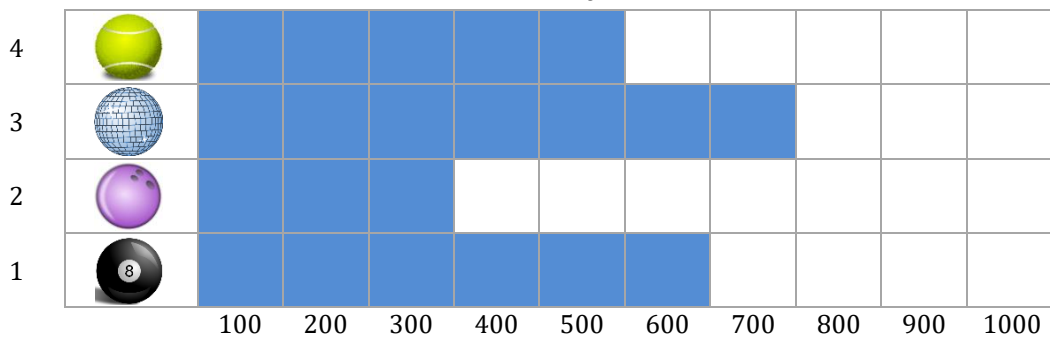
Use the bar graph to answer the questions.

Mia buys are 1000 beach balls, 400 rugby balls, 800 soccer balls and 900 volley balls for their community. How many balls does she buy altogether?



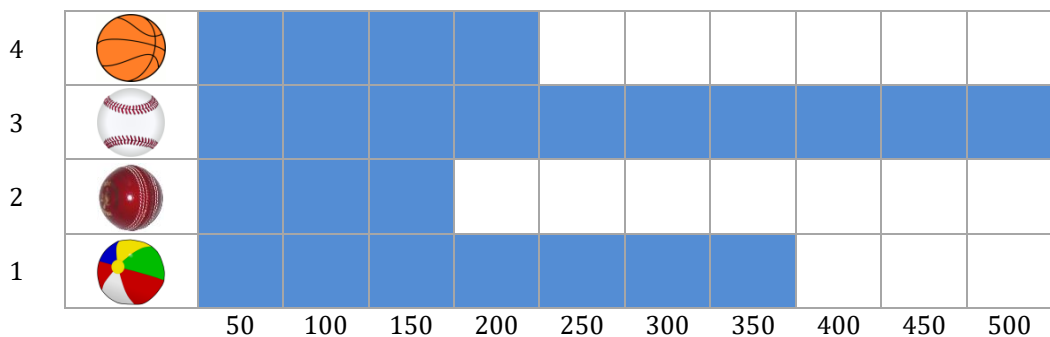
3100 Balls

There are brought 500 tennis balls, 700 disco balls, 300 bowling balls and 600 eight balls in a room. How many balls are there in the room?



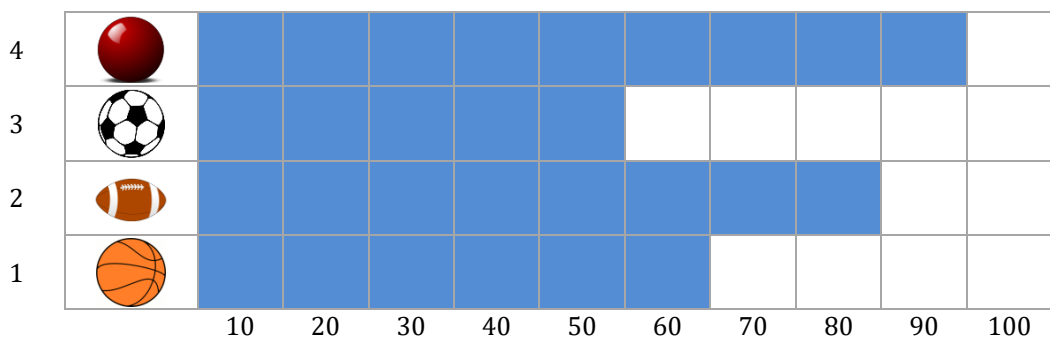
2100 Balls

Daniel brought 200 basket balls, 500 base balls, 150 cricket balls and 350 beach balls. How many balls did he bring altogether?



1200 Balls

Emily brought 90 red snooker balls, Evan brought 50 soccer balls, Ryan brought 80 rugby balls and Luke brought 60 basket balls. How many balls did they bring altogether?



280 Balls