

Matching Bar graphs

Name: _____

Date: _____

Determine which bar graph best represents the information in the chart.

1)

Location	Pictures Taken
Zoo	50
Home	100
School	150
Party	200

2)

Location	Pictures Taken
Zoo	200
Home	100
School	50
Party	150

3)

Location	Pictures Taken
Zoo	50
Home	150
School	200
Party	100

4)

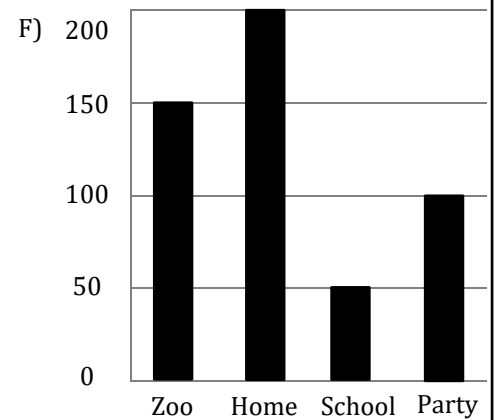
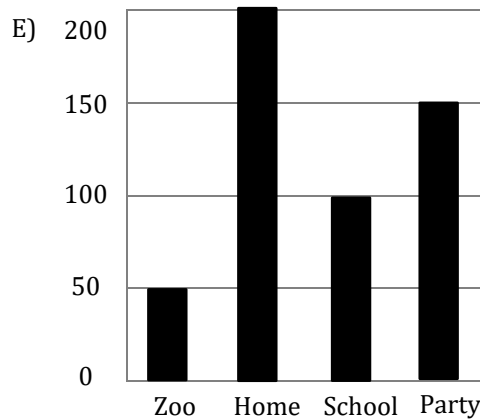
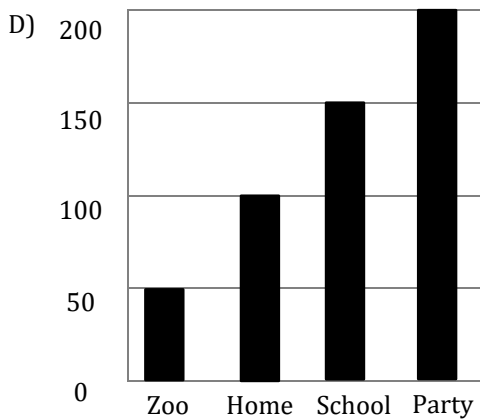
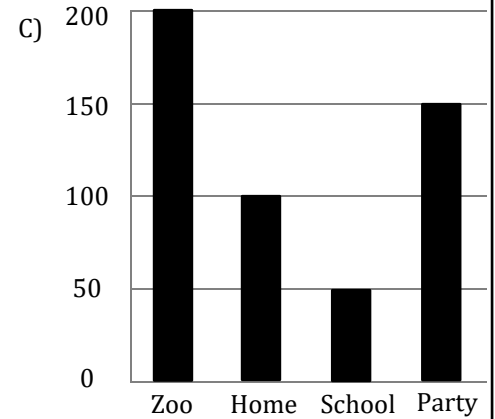
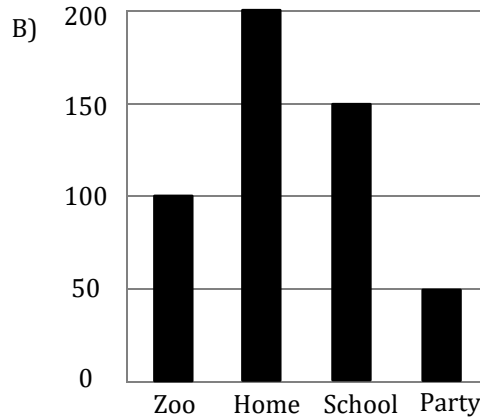
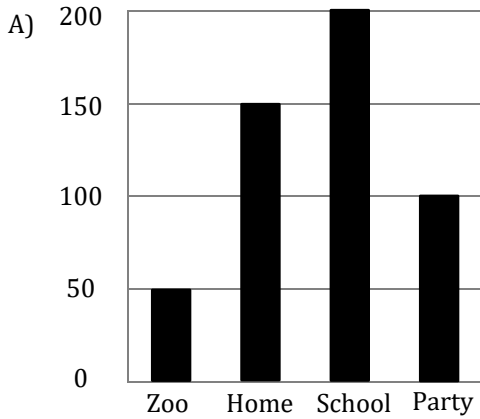
Location	Pictures Taken
Zoo	50
Home	200
School	100
Party	150

5)

Location	Pictures Taken
Zoo	150
Home	200
School	50
Party	100

6)

Location	Pictures Taken
Zoo	100
Home	200
School	150
Party	50



Answers:

1) → _____

2) → _____

3) → _____

4) → _____

5) → _____

6) → _____

Matching Bar graphs

Name: _____

Date: _____

Determine which bar graph best represents the information in the chart.

1)

Location	Pictures Taken
Zoo	50
Home	100
School	150
Party	200

2)

Location	Pictures Taken
Zoo	200
Home	100
School	50
Party	150

3)

Location	Pictures Taken
Zoo	50
Home	150
School	200
Party	100

4)

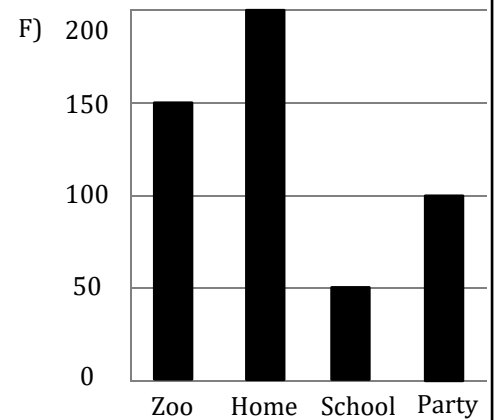
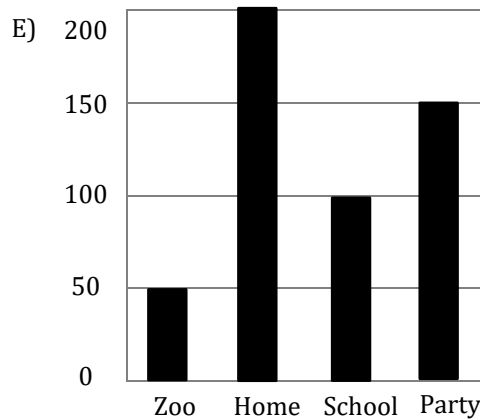
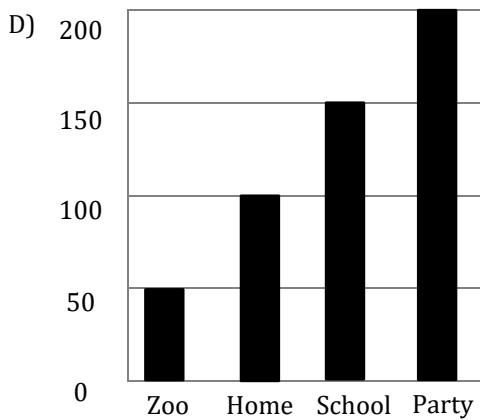
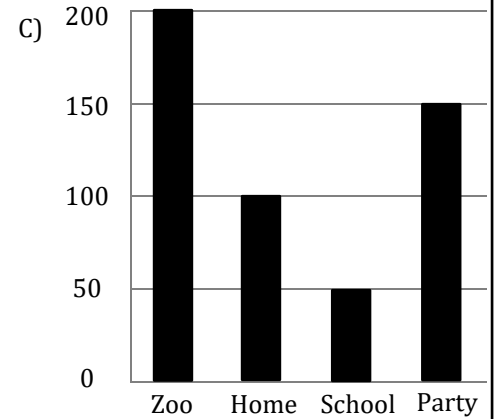
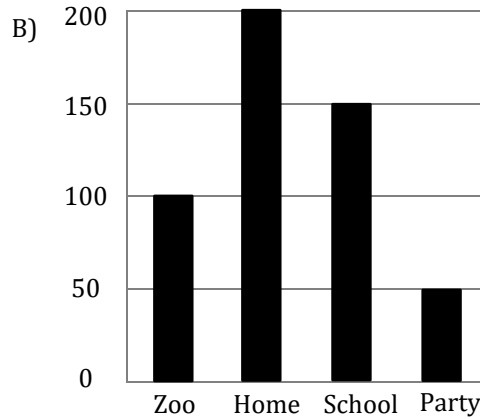
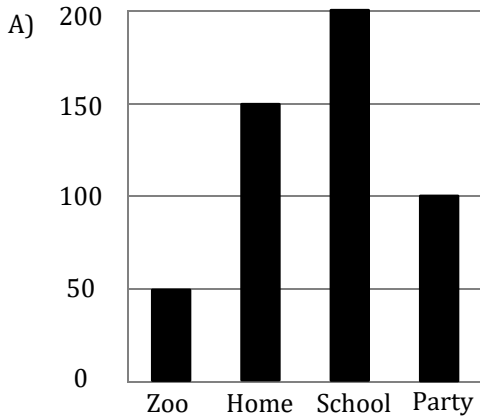
Location	Pictures Taken
Zoo	50
Home	200
School	100
Party	150

5)

Location	Pictures Taken
Zoo	150
Home	200
School	50
Party	100

6)

Location	Pictures Taken
Zoo	100
Home	200
School	150
Party	50



Answers:

1) → D

2) → C

3) → A

4) → E

5) → F

6) → B