

# Matching Bar graphs

Name: \_\_\_\_\_

Date: \_\_\_\_\_

**Determine which bar graph best represents the information in the chart.**

1)

Toys	Number of Toys
Car	3000
Teddy	9000
Ball	12000
Lego	6000

2)

Toys	Number of Toys
Car	12000
Teddy	9000
Ball	6000
Lego	3000

3)

Toys	Number of Toys
Car	6000
Teddy	12000
Ball	3000
Lego	9000

4)

Toys	Number of Toys
Car	9000
Teddy	3000
Ball	6000
Lego	12000

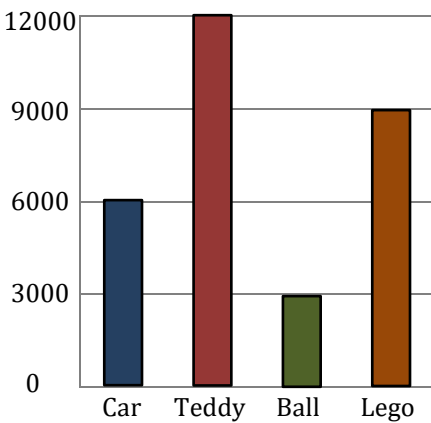
5)

Toys	Number of Toys
Car	3000
Teddy	12000
Ball	6000
Lego	9000

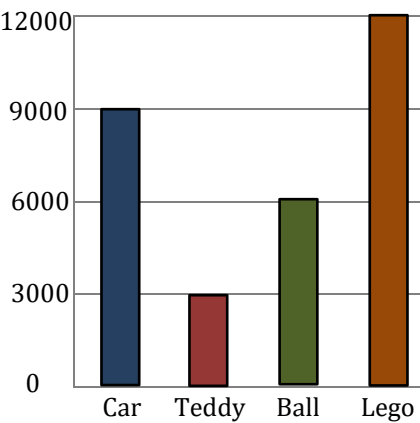
6)

Toys	Number of Toys
Car	9000
Teddy	12000
Ball	6000
Lego	3000

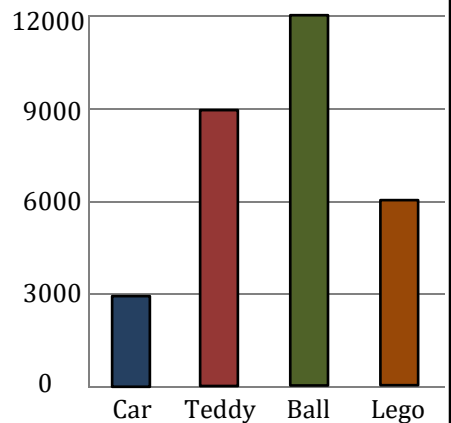
A)



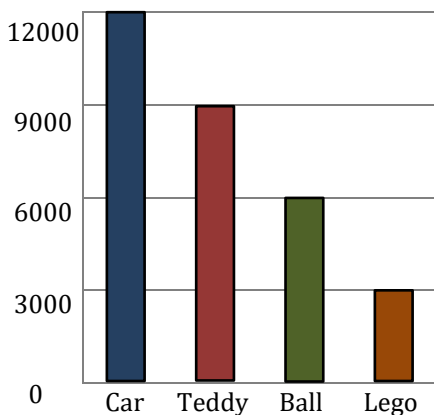
B)



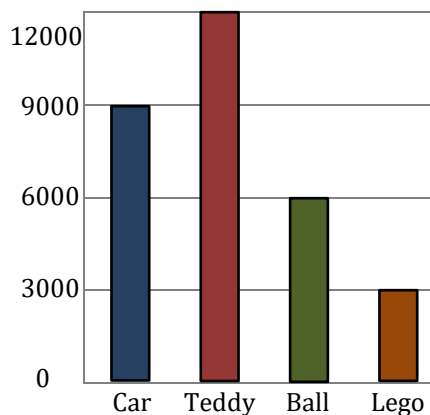
C)



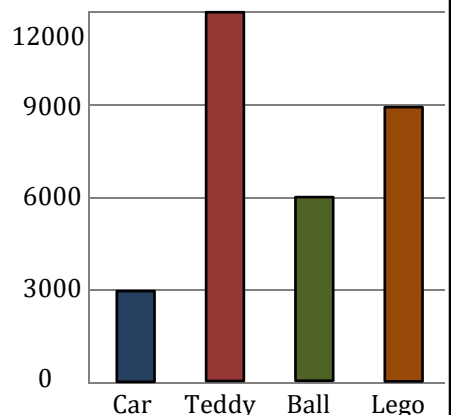
D)



E)



F)



**Answers:**

1) → \_\_\_\_\_

2) → \_\_\_\_\_

3) → \_\_\_\_\_

4) → \_\_\_\_\_

5) → \_\_\_\_\_

6) → \_\_\_\_\_

# Matching Bar graphs

Name: \_\_\_\_\_

Date: \_\_\_\_\_

**Determine which bar graph best represents the information in the chart.**

1)

Toys	Number of Toys
Car	3000
Teddy	9000
Ball	12000
Lego	6000

2)

Toys	Number of Toys
Car	12000
Teddy	9000
Ball	6000
Lego	3000

3)

Toys	Number of Toys
Car	6000
Teddy	12000
Ball	3000
Lego	9000

4)

Toys	Number of Toys
Car	9000
Teddy	3000
Ball	6000
Lego	12000

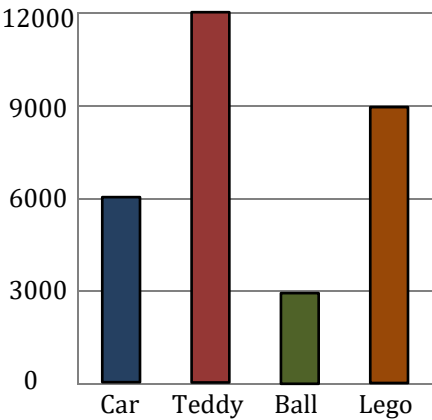
5)

Toys	Number of Toys
Car	3000
Teddy	12000
Ball	6000
Lego	9000

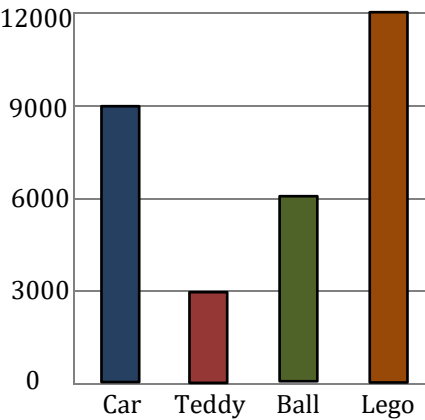
6)

Toys	Number of Toys
Car	9000
Teddy	12000
Ball	6000
Lego	3000

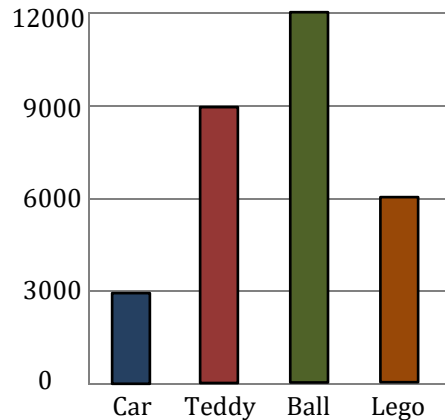
A)



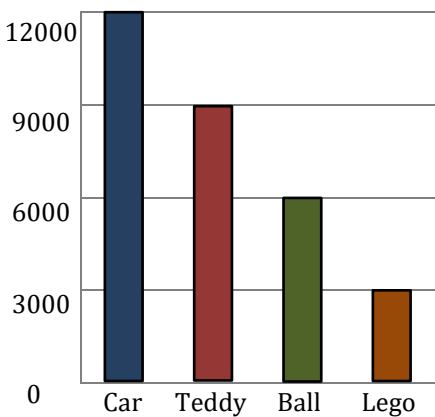
B)



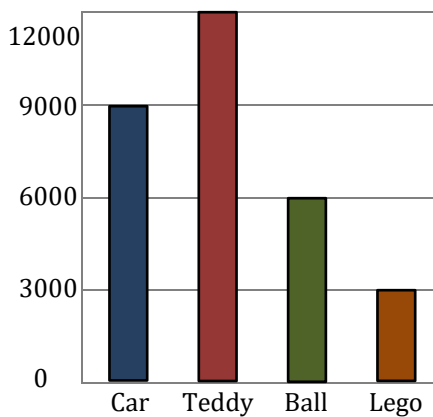
C)



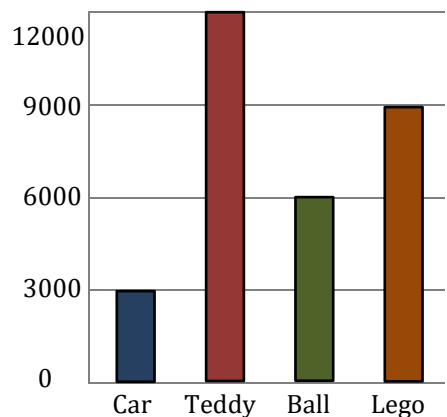
D)



E)



F)



**Answers:**

1) →     C    

2) →     D    

3) →     A    

4) →     B    

5) →     F    

6) →     E