

# Bar Graph

Name: \_\_\_\_\_

Date: \_\_\_\_\_

**Arthur owns some farm animals the list below shows the number of animals he has in his farm. Each pet is equal to 10 pets.**

Farm animals	
Dog	Horse
Hen	Cow
Dog	Horse
Hen	Cow
Dog	Horse
Dog	Cow
	Horse

Write the Count in the chart.

Horse	Dog	Cow	Hen

1) Were there less horses or hens?

\_\_\_\_\_

2) Which animal was there the most?

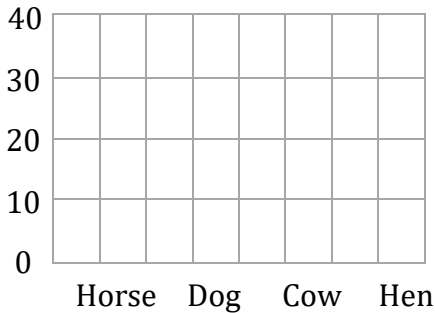
\_\_\_\_\_

3) How many cows and horses do they have altogether?

\_\_\_\_\_

4) Do they have more Dogs or cows?

\_\_\_\_\_



**Mr. John owns a shop the list below shows the sales information. Each drink is equal to 20 drinks.**

favorite Drinks	
Coffee	Coffee
Water	Water
Juice	Coffee
Water	Juice
Juice	Coffee
Water	Water
Juice	Milk
Milk	Coffee
Coffee	Water

Write the Count in the chart.

Coffee	Juice	Water	Milk

1) Which drink sold the least?

\_\_\_\_\_

2) Did they sell more Juice or more Water?

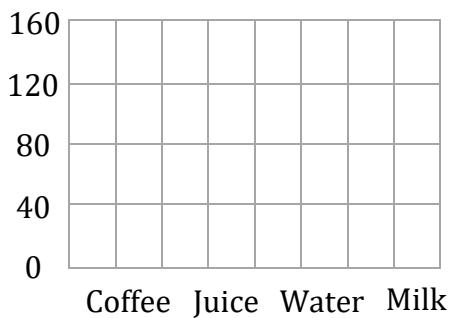
\_\_\_\_\_

3) Which drink sold the most?

\_\_\_\_\_

4) How many total drinks were sold?

\_\_\_\_\_



# Bar Graph

Name: \_\_\_\_\_

Date: \_\_\_\_\_

**Arthur owns some farm animals the list below shows the number of animals he has in his farm. Each pet is equal to 10 pets.**

Farm animals	
Dog	Horse
Hen	Cow
Dog	Horse
Hen	Cow
Dog	Horse
Dog	Cow
	Horse

Write the Count in the chart.

Horse	Dog	Cow	Hen
4 x 10	4 x 10	3 x 10	2 x 10

1) Were there less horses or hens?

Hens

---

2) Which animal was there the most?

Horse and Dog

---

3) How many cows and horses do they have altogether?

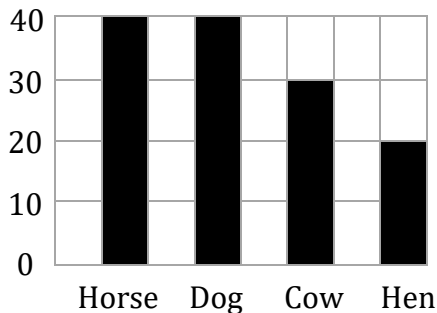
70

---

4) Do they have more Dogs or cows?

Dogs

---



**Mr. John owns a shop the list below shows the sales information. Each drink is equal to 20 drinks.**

favorite Drinks	
Coffee	Coffee
Water	Water
Juice	Coffee
Water	Juice
Juice	Coffee
Water	Water
Juice	Milk
Milk	Coffee
Coffee	Water

Write the Count in the chart.

Coffee	Juice	Water	Milk
6 x 20	4 x 20	6 x 20	2 x 20

1) Which drink sold the least?

Milk

---

2) Did they sell more Juice or more Water?

Water

---

3) Which drink sold the most?

Coffee and Water

---

4) How many total drinks were sold?

360

---

