

Bar Graph

Name: _____

Date: _____

The students in a school, color their favorite planet. Each planet is equal to 500 planets.

students favorite planet

Mercury	Jupiter
Venus	Mars
Venus	Jupiter
Mars	
Mercury	
Venus	
Mars	

Write the Count in the chart.


Mercury	Venus	Mars	Jupiter

- 1) Did more students like Mercury or Mars?

- 2) How many more students colored Venus than Jupiter?

- 3) Which is the least favorite color planet?

- 4) Which was the most favorite color planet?



A School took a survey among the students on their favorite musical instrument and recorded the data. Each instrument is equal to 300 instruments.

Favorite Instrument

Piano	Drum
Tuba	Guitar
Piano	Drum
Tuba	
Piano	
Tuba	
Piano	

Write the Count in the chart.

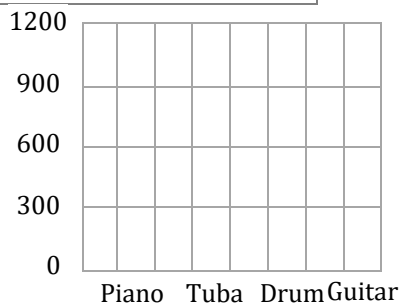
Piano	Tuba	Drum	Guitar

- 1) Do they have more pianos or tubas?

- 2) What is the difference in the count between Drum and Guitar?

- 3) How many tubas are there?

- 4) How many total musical instruments are there?



Bar Graph

Name: _____

Date: _____

The students in a school, color their favorite planet. Each planet is equal to 500 planets.

students favorite planet

Mercury Jupiter
 Venus Mars
 Venus Jupiter
 Mars
 Mercury
 Venus
 Mars

Write the Count in the chart.

Mercury	Venus	Mars	Jupiter
2 x 500	3 x 500	3 x 500	2 x 500

1) Did more students like Mercury or Mars?

Mars

2) How many more students colored Venus than Jupiter?

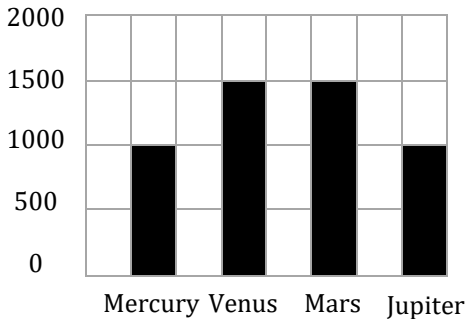
500

3) Which is the least favorite color planet?

Mercury and Jupiter

4) Which was the most favorite color planet?

Venus and Mars



A School took a survey among the students on their favorite musical instrument and recorded the data. Each instrument is equal to 300 instruments.

Favorite Instrument

Piano Drum
 Tuba Guitar
 Piano Drum
 Tuba
 Piano
 Tuba
 Piano

Write the Count in the chart.

Piano	Tuba	Drum	Guitar
4 x 300	3 x 300	2 x 300	1 x 300

1) Do they have more pianos or tubas?

Pianos

2) What is the difference in the count between Drum and Guitar?

300

3) How many tubas are there?

900

4) How many total musical instruments are there?

3000

