


Bar Graph

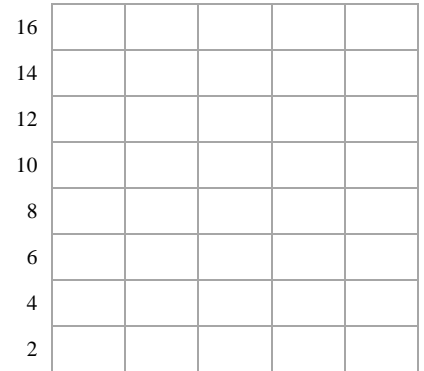
Name: _____

Date: _____

Mr. Benn counted how many of each type of vegetables that grow in the backyard. Make the tally marks and write the number to answer the questions.



| Types of vegetables | Tally marks | Numbers |
|---------------------|-------------|---------|
| broccoli | | |
| tomato | | |
| eggplant | | |
| cabbage | | |
| pumpkin | | |



- 1) How many vegetables were there in all?

- 2) How many pumpkin and broccoli are there?

- 3) Which vegetable counts to 14?

- 4) Name the vegetable that grow less in the Mr. Benn's backyard?


- 5) If 10 more pumpkins are grown in the backyard then what will be the count of the pumpkins?






Bar Graph

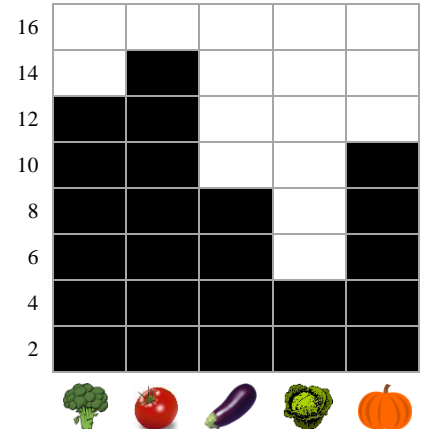
Name: _____

Date: _____

Mr. Benn counted how many of each type of vegetables that grow in the backyard. Make the tally marks and write the number to answer the questions.



| Types of vegetables | | Tally marks | Numbers |
|--|----------|-------------|---------|
|  | broccoli | | 12 |
|  | tomato | | 14 |
|  | eggplant | | 8 |
|  | cabbage | | 4 |
|  | pumpkin | | 10 |



- 1) How many vegetables were there in all?
48
- 2) How many pumpkin and broccoli are there?
22
- 3) Which vegetable counts to 14?
Tomato
- 4) Name the vegetable that grow less in the Mr. Benn's backyard?
Cabbage
- 5) If 10 more pumpkins are grown in the backyard then what will be the count of the pumpkins?
20