








# Bar Graph

Name: \_\_\_\_\_

Date: \_\_\_\_\_

Mr. John noted the miles travelled by the vehicles shown in the box below. Color the bar graph and answer the questions.

|                                                                                            |                                                                                            |                                                                                              |
|--------------------------------------------------------------------------------------------|--------------------------------------------------------------------------------------------|----------------------------------------------------------------------------------------------|
|  20 miles |  50 miles |  10 miles |
|  70 miles |  30 miles |  40 miles |






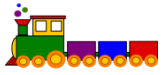


- 1) What is the distance travelled by car and bus?  
\_\_\_\_\_
- 2) The difference between miles travelled by bicycle and jeep is  
\_\_\_\_\_
- 3) Which vehicle did most travelled  
\_\_\_\_\_
- 4) Total miles travelled by vehicles is  
 180                       300  
 220                         250

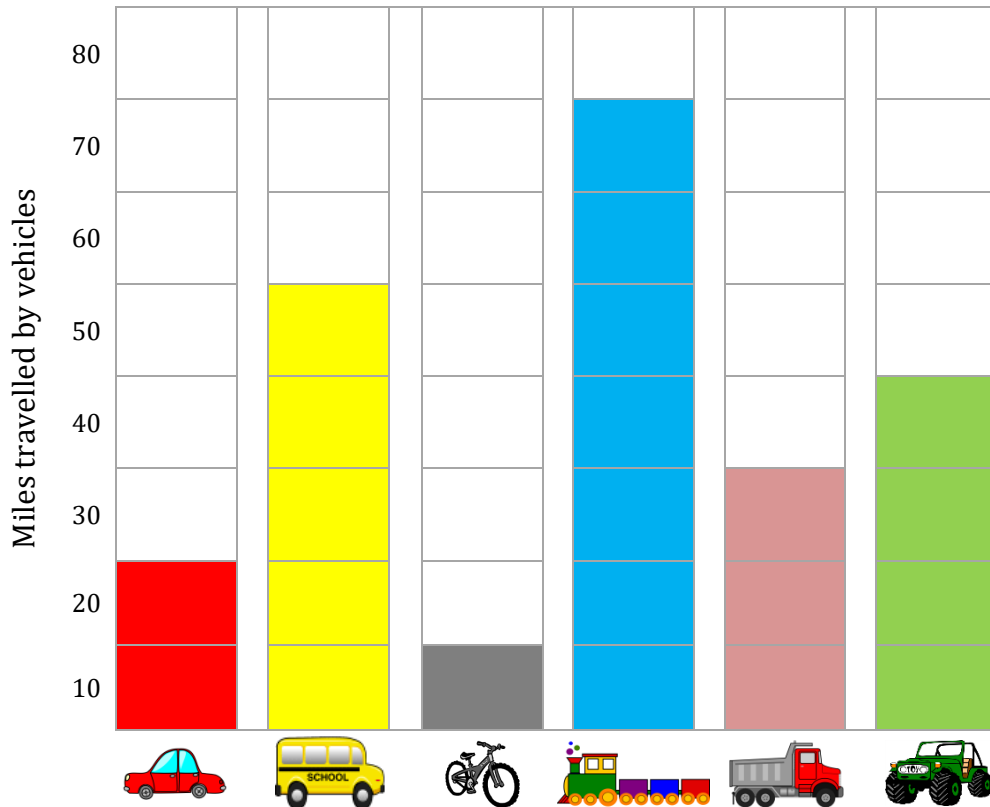
# Bar Graph

Name: \_\_\_\_\_

Date: \_\_\_\_\_

**Mr. John noted the miles travelled by the vehicles shown in the box below. Color the bar graph and answer the questions.**

|                                                                                                   |                                                                                                   |                                                                                                     |
|---------------------------------------------------------------------------------------------------|---------------------------------------------------------------------------------------------------|-----------------------------------------------------------------------------------------------------|
|  <b>20 miles</b> |  <b>50 miles</b> |  <b>10 miles</b> |
|  <b>70 miles</b> |  <b>30 miles</b> |  <b>40 miles</b> |



1) What is the distance travelled by car and bus?

70 miles

2) The difference between miles travelled by bicycle and jeep is

30 miles

3) Which vehicle did most travelled

Train

4) Total miles travelled by vehicles is

180

300

220

250