

Flowers Pictograph




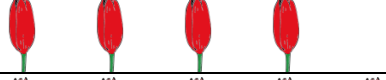

Name: _____






Date: _____





These two pictographs are comparing two types of flowers imported from Colombia. Answer the questions below using information from the pictograph.



Day	Number of Tulips Import
Monday	
Tuesday	
Wednesday	
Thursday	
Friday	

Day	Number of Daisies Import
Monday	
Tuesday	
Wednesday	
Thursday	
Friday	


Hint
= 100 flowers

Hint
= 150 flowers
Questions:

1) **How many Tulips did Tuesday and Friday Import?**

Answer: _____

2) **How many more Daisies were imported on Friday than Thursday?**

Answer: _____

3) **How many Tulips were exported on Wednesday and Thursday altogether?**

Answer: _____

4) **How many Daisies did they import altogether?**

Answer: _____

5) **Which of the two days did they export fewer Tulips?**

Answer: _____

6) **How many Daisies were there in table?**

Answer: _____

Flowers Pictograph




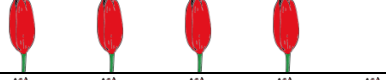

Name: _____






Date: _____



These two pictographs are comparing two types of flowers imported from Colombia. Answer the questions below using information from the pictograph.



Day	Number of Tulips Import
Monday	
Tuesday	
Wednesday	
Thursday	
Friday	

Day	Number of Daisies Import
Monday	
Tuesday	
Wednesday	
Thursday	
Friday	



Hint
= 100 flowers



Hint
= 150 flowers

Questions:

1) How many Tulips did Tuesday and Friday Import?

Answer: 1100 Tulips

2) How many more Daisies were imported on Friday than Thursday?

Answer: 450 Daisies

3) How many Tulips were exported on Wednesday and Thursday altogether?

Answer: 600 Tulips

4) How many Daisies did they import altogether?

Answer: 2850 Daisies

5) Which of the two days did they export fewer Tulips?

Answer: Monday and Wednesday

6) How many Daisies were there in table?

Answer: 19 Daisies