


Toys Pictograph






Name: _____

Date: _____

A teacher asked all the students in his class about their favorite toys. The pictures below show the favorite toys of the students. Use the information to answer the questions.



1) Complete the Data table

7	5	3	4	2
				

2) How many teddies are there?

3) Are there more robots than jeeps?

4) Which toy counts to 3?

5) Which one is least in all?

Toys Pictograph






Name: _____

Date: _____

A teacher asked all the students in his class about their favorite toys. The pictures below show the favorite toys of the students. Use the information to answer the questions.



1) Complete the Data table

7	5	3	4	2
				

2) How many teddies are there?

7 teddies

3) Are there more robots than jeeps?

No

4) Which toy counts to 3?

Ball

5) Which one is least in all?

Robot
