

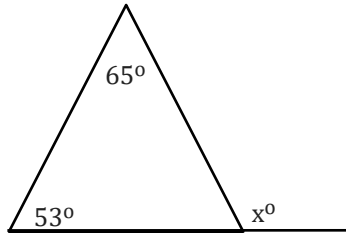
Exterior Angle

Name: _____

Date: _____

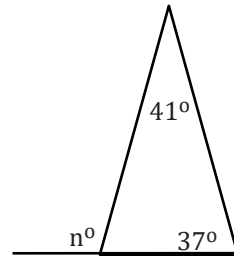
Solve the given variable.

1)



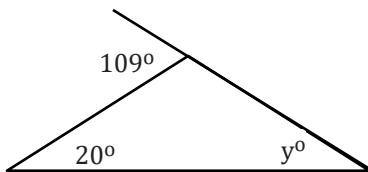
$x =$ _____

2)



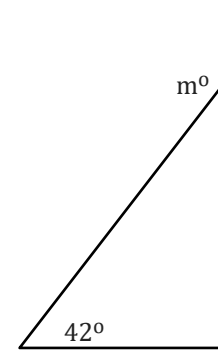
$n =$ _____

3)



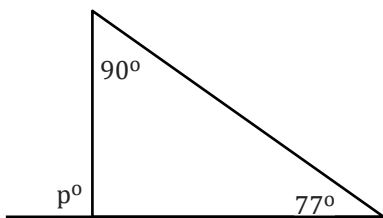
$y =$ _____

4)



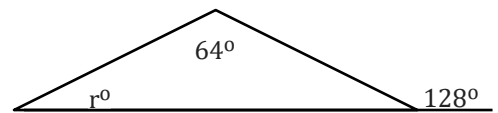
$m =$ _____

5)



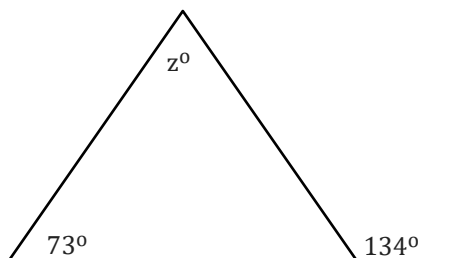
$p =$ _____

6)



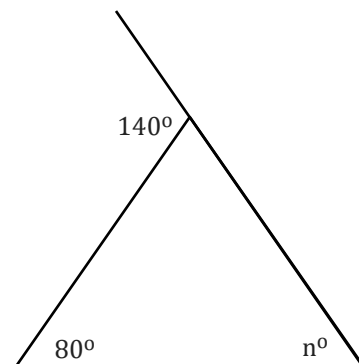
$r =$ _____

7)



$z =$ _____

8)



$n =$ _____

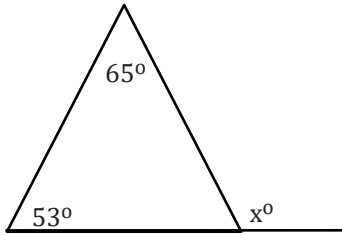
Exterior Angle

Name: _____

Date: _____

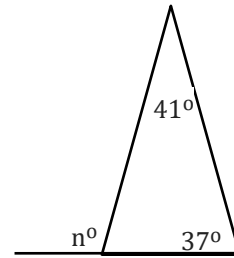
Solve the given variable.

1)



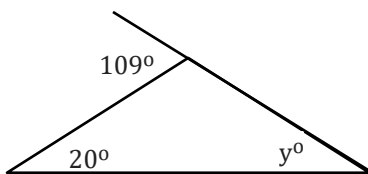
$$x = \underline{118^\circ}$$

2)



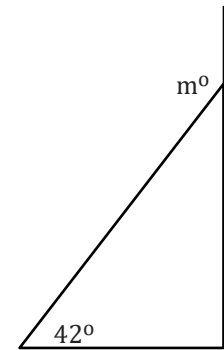
$$n = \underline{78^\circ}$$

3)



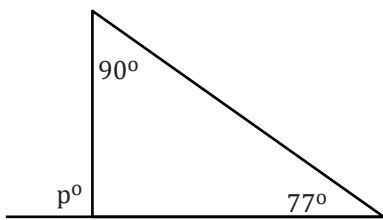
$$y = \underline{89^\circ}$$

4)



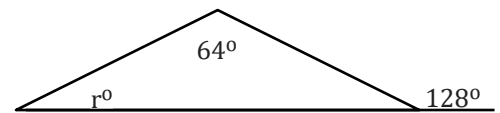
$$m = \underline{132^\circ}$$

5)



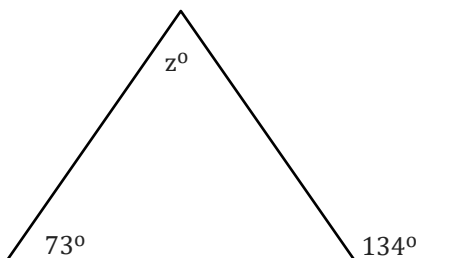
$$p = \underline{167^\circ}$$

6)



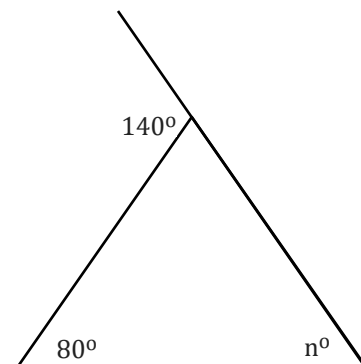
$$r = \underline{64^\circ}$$

7)



$$z = \underline{61^\circ}$$

8)



$$n = \underline{60^\circ}$$