











Name: _____

Date: _____

Money

Use the coins to buy the items.

Items					
 <p style="text-align: right;">3.75\$</p>	6	3	0	0	0
 <p style="text-align: right;">9.99\$</p>					
 <p style="text-align: right;">8.88\$</p>					
 <p style="text-align: right;">5.80\$</p>					
 <p style="text-align: right;">80 ¢</p>					











<p>10 pennies = <u> 2 </u> nickels</p>	<p>2 dollars = _____ dimes</p>
<p>8 quarters = _____ dollars</p>	<p>8 nickels = _____ dimes</p>

Name: _____

Date: _____

Money

Use the coins to buy the items.

Items					
 3.75\$	6	3	0	0	0
 9.99\$	18	3	2	0	4
 8.88\$	16	3	1	0	3
 5.80\$	10	3	0	1	0
 80 ¢	0	3	0	1	0

10 pennies = 2 nickels2 dollars = 20 dimes8 quarters = 2 dollars8 nickels = 4 dimes