


# Money

Name: \_\_\_\_\_

Date: \_\_\_\_\_

Calculate the total amount and write the change.



1.75\$



35 ¢



75 ¢




1.25 \$

**Purchase items**

**Pay**

**How much change?**

1)



4 \$

2)



6 \$

3)




8 \$

4)



10 \$

5)




5\$

# Money

Name: \_\_\_\_\_

Date: \_\_\_\_\_

Calculate the total amount and write the change.



1.75\$



35 ¢



75 ¢




1.25 \$

**Purchase items**

**Pay**

**How much change?**

1)



4 \$

1 \$

2)



6 \$

4.40 \$

3)



8 \$

5.50 \$


4)



10 \$

6.75 \$

5)



5\$

2.15 \$