

# Money

Name: \_\_\_\_\_

Date: \_\_\_\_\_

Calculate the total amount and write the change.




2.50\$



2.75 \$



3.30 \$



5 \$

**Purchase items**

**Pay**


**How much change?**

1)




10 \$

2)




20 \$

3)



15 \$

4)



15 \$

5)



25 \$

# Money

Name: \_\_\_\_\_

Date: \_\_\_\_\_

Calculate the total amount and write the change.




2.50\$



2.75 \$



3.30 \$



5 \$

**Purchase items**

**Pay**

**How much change?**


1)



10 \$

3.95 \$

2)



20 \$

12.50 \$


3)



15 \$

9.50 \$

4)



15 \$

6.45 ¢

5)



25 \$

13.95 ¢