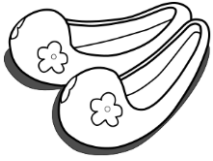


Money

Name: _____

Date: _____

Money word problems.




\$10.99



\$13.58



\$9.75



\$300



\$2



\$1.25



\$15



\$32.55



\$26



\$82



\$5



\$1

- 1) Barbie bought a shoes and a bag. How much money does she need to pay?
- 2) Agustin had \$25. He bought a mirror. How much money does he have left?
- 3) Macy buys a bracelet and vest. She has a coupon worth \$41.23. How much money does need to pay?
- 4) Polly has enough money to buy a cheapest thing. How much money does she need to buy a costliest thing?
- 5) Anne bought a violin, umbrella and book. How much money does she pay?
- 6) The sales man sold 3 bracelet s and 2 bicycles. How much money did he make on those?

Money

Name: _____

Date: _____

Money word problems.




\$10.99



\$13.58



\$9.75



\$300



\$2



\$1.25



\$15



\$32.55



\$26



\$82



\$5



\$1

1) Barbie bought a shoes and a bag. How much money does she need to pay?

\$24.57

2) Agustin had \$25. He bought a mirror. How much money does he have left?

\$10

3) Macy buys a bracelet and vest. She has a coupon worth \$41.23. How much money does need to pay?

\$17.32

4) Polly has enough money to buy a cheapest thing. How much money does she need to buy a costliest thing?

\$299

5) Anne bought a violin, umbrella and book. How much money does she pay?

\$88

6) The sales man sold 3 bracelet s and 2 bicycles. How much money did he make on those?

\$678