

# Money

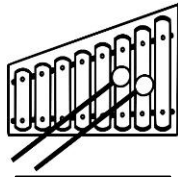
Name: \_\_\_\_\_

Date: \_\_\_\_\_

## Money word problems.



\$29.98




\$8



\$3.70



\$34



\$5.37



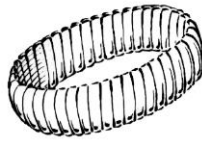
\$2.58



¢10



\$32.55



\$26



\$20.84



\$11



\$15

- 1) Anne bought a vest and a schoolbag. How much money does she need to pay?
- 2) Barbie had \$68. She bought a dress. How much money does she have left?
- 3) Polly buys a bracelet and a shirt. She has a coupon worth \$27.22. How much money does need to pay?
- 4) Mary has enough money to buy a cheapest thing. How much money does she need to buy a costliest thing?
- 5) Karol bought a cake, brush and hat. How much money does she pay?
- 6) The sales man sold 20 balls and 15 rings. How much money did he make on those?

# Money

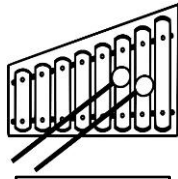
Name: \_\_\_\_\_

Date: \_\_\_\_\_

## Money word problems.



\$29.98




\$8



\$3.70



\$34



\$5.37



\$2.58



¢10



\$32.55



\$26



\$20.84



\$11



\$15

1) Anne bought a vest and a schoolbag. How much money does she need to pay?

\$53.39

2) Barbie had \$68. She bought a dress. How much money does she have left?

\$32.02

3) Polly buys a bracelet and a shirt. She has a coupon worth \$27.22. How much money does need to pay?

\$32.78

4) Mary has enough money to buy a cheapest thing. How much money does she need to buy a costliest thing?

\$33.90

5) Karol bought a cake, brush and hat. How much money does she pay?

\$20.07

6) The sales man sold 20 balls and 15 rings. How much money did he make on those?

\$40.70