

Name: \_\_\_\_\_

Date: \_\_\_\_\_

## Rounding Money

Round the cost of each item to the nearest dollar.

1)



\$28.78

\_\_\_\_\_

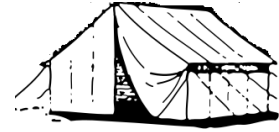
2)



\$42.31

\_\_\_\_\_

3)



\$138.69

\_\_\_\_\_

4)



\$5.95

\_\_\_\_\_

5)



\$34.12

\_\_\_\_\_

6)



\$80.45

\_\_\_\_\_

Round the cost of each item to the nearest ten dollars.

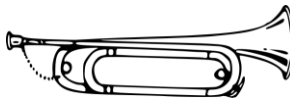
1)



\$18.63

\_\_\_\_\_

2)



\$116.45

\_\_\_\_\_

3)



\$87.32

\_\_\_\_\_

4)



\$26.15

\_\_\_\_\_


5)



\$27.44

\_\_\_\_\_

6)



\$779.46

\_\_\_\_\_

Name: \_\_\_\_\_

Date: \_\_\_\_\_

## Rounding Money

Round the cost of each item to the nearest dollar.

1)



\$28.78

\$29

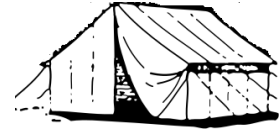
2)



\$42.31

\$42

3)



\$138.69

\$139

4)



\$5.95

\$6

5)



\$34.12

\$34

6)



\$80.45

\$80

Round the cost of each item to the nearest ten dollars.

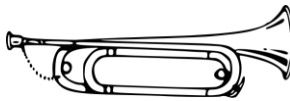
1)



\$18.63

\$20

2)



\$116.45

\$120

3)



\$87.32

\$90

4)



\$26.15

\$30


5)



\$27.44

\$30

6)



\$779.46

\$780