

Finding Ratios

Name: _____


Date: _____

Solve each problem.


1. What is the ratio of circles to stars?



2. What is the ratio of triangles to hearts?




3. What is the ratio of diamonds to moons?



4. What is the ratio of stars to trapezoids?



5. What is the ratio of hearts to squares?



Finding Ratios

Name: _____

Date: _____


Solve each problem.

1. What is the ratio of circles to stars?




6 : 8

2. What is the ratio of triangles to hearts?



10 : 5

3. What is the ratio of diamonds to moons?




9 : 7

4. What is the ratio of stars to trapezoids?



7 : 9

5. What is the ratio of hearts to squares?



8 : 10