


Name: _____

Date: _____

Ratio in Three Ways

Write the ratio in three different ways.


1. Pencils to erasers



Words : _____ Ratio : _____

Fraction : _____

2. Mangoes to pineapples



Words : _____ Ratio : _____

Fraction : _____


3. Butterflies to spiders



Words : _____ Ratio : _____

Fraction : _____


4. Buns to ice creams



Words : _____ Ratio : _____

Fraction : _____

5. Jeeps to bikes



Words : _____ Ratio : _____

Fraction : _____

6. Pumpkins to candies



Words : _____ Ratio : _____

Fraction : _____


Name: _____

Date: _____

Ratio in Three Ways

Write the ratio in three different ways.


1. Pencils to erasers



Words : 12 to 6 Ratio : 12 : 6

Fraction : 12 / 6

2. Mangoes to pineapples



Words : 6 to 6 Ratio : 6 : 6

Fraction : 6 / 6


3. Butterflies to spiders



Words : 7 to 6 Ratio : 7 : 6

Fraction : 7 / 6


4. Buns to ice creams



Words : 8 to 7 Ratio : 8 : 7

Fraction : 8 / 7

5. Jeeps to bikes



Words : 12 to 9 Ratio : 12 : 9

Fraction : 12 / 9

6. Pumpkins to candies



Words : 9 to 7 Ratio : 9 : 7

Fraction : 9 / 7