

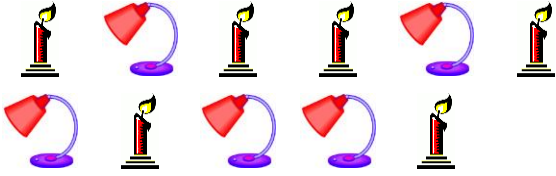
Name: _____

Date: _____

Ratio in Three Ways

Write the ratio in three different ways.


1. Candles to lamps



Words : _____ Ratio : _____

Fraction : _____

2. Apples to candies



Words : _____ Ratio : _____

Fraction : _____

3. Balls to wheels



Words : _____ Ratio : _____

Fraction : _____


4. Pianos to drums



Words : _____ Ratio : _____

Fraction : _____

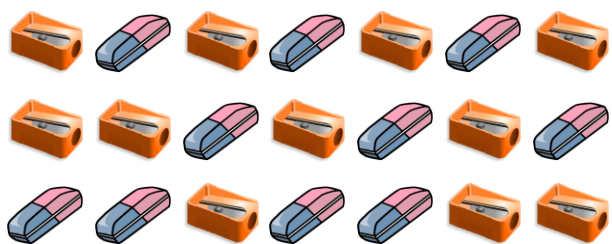
5. Elephants to rabbits



Words : _____ Ratio : _____

Fraction : _____

6. Sharpeners to erasers



Words : _____ Ratio : _____

Fraction : _____

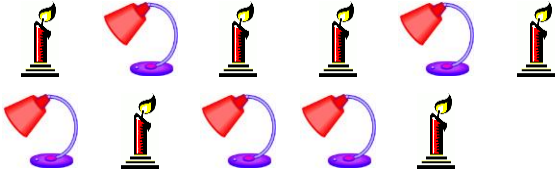
Name: _____

Date: _____

Ratio in Three Ways

Write the ratio in three different ways.


1. Candles to lamps



Words : 6 to 5 Ratio : 6 : 5

Fraction : 6 / 5

2. Apples to candies



Words : 9 to 8 Ratio : 9 : 8

Fraction : 9 / 8

3. Balls to wheels



Words : 7 to 6 Ratio : 7 : 6

Fraction : 7 / 6


4. Pianos to drums



Words : 6 to 7 Ratio : 6 : 7

Fraction : 6 / 7

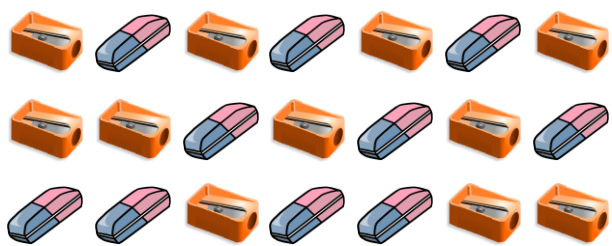
5. Elephants to rabbits



Words : 6 to 6 Ratio : 6 : 6

Fraction : 6 / 6

6. Sharpeners to erasers



Words : 11 to 10 Ratio : 11 : 10

Fraction : 11 / 10