

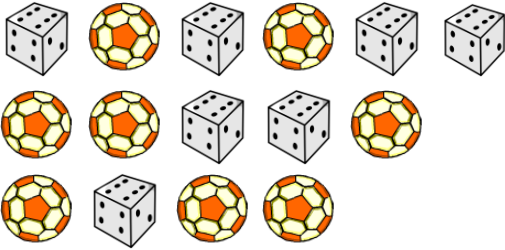
Name: _____

Date: _____

Ratio in Three Ways

Write the ratio in three different ways.

1. Balls to dice



Words : _____ Ratio : _____

Fraction : _____


2. Bags to tins



Words : _____ Ratio : _____

Fraction : _____


3. Peaches to trees



Words : _____ Ratio : _____

Fraction : _____

4. Erasers to crayons



Words : _____ Ratio : _____

Fraction : _____


5. Buns to cakes



Words : _____ Ratio : _____

Fraction : _____

6. Candies to cherries



Words : _____ Ratio : _____

Fraction : _____

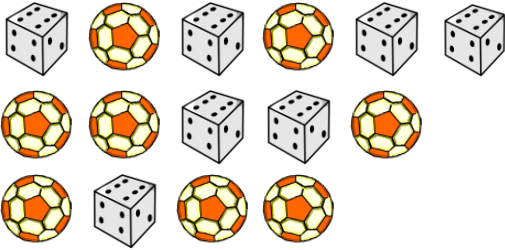
Name: _____

Date: _____

Ratio in Three Ways

Write the ratio in three different ways.

1. Balls to dice



Words : 8 to 7 Ratio : 8 : 7

Fraction : 8 / 7


2. Bags to tins



Words : 6 to 10 Ratio : 6 : 10

Fraction : 6 / 10


3. Peaches to trees



Words : 7 to 6 Ratio : 7 : 6

Fraction : 7 / 6

4. Erasers to crayons



Words : 10 to 7 Ratio : 10 : 7

Fraction : 10 / 7


5. Buns to cakes



Words : 5 to 9 Ratio : 5 : 9

Fraction : 5 / 9

6. Candies to cherries



Words : 11 to 12 Ratio : 11 : 12

Fraction : 11 / 12