






Name: _____

Date: _____



Ratio: Part to Part

Write the ratio of bunnies to doves.





Find each ratio and simplify, if necessary.





The Ratio of  to  = 6 to 4 = 3 to 2





The Ratio of  to  = _____ = _____



The Ratio of  to  = _____ = _____








The Ratio of  to  = _____ = _____

Name: _____

Date: _____



Ratio: Part to Part

Write the ratio of bunnies to doves.



Find each ratio and simplify, if necessary.





The Ratio of  to  = $6 \text{ to } 4$ = $3 \text{ to } 2$



The Ratio of  to  = $5 \text{ to } 7$



The Ratio of  to  = $7 \text{ to } 7$ = $1 \text{ to } 1$



The Ratio of  to  = $7 \text{ to } 4$