

Capacity Estimation

Name: _____

Date: _____

Estimate the capacity of each object.

Circle the correct answer.



Less than 1 liter

1 liter

Greater than 1 liter

1)



< liter > liter

2)



< liter > liter

3)



< liter > liter

4)



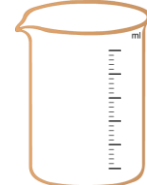
< liter > liter

5)



< liter > liter

6)



< liter > liter

7)



< liter > liter

8)



< liter > liter

9)



< liter > liter

Capacity Estimation

Name: _____

Date: _____

Estimate the capacity of each object.

Circle the correct answer.



Less than 1 liter



1 liter



Greater than 1 liter

1)



< liter

> liter

2)



< liter

> liter

3)



< liter

> liter

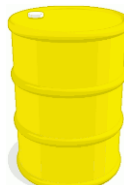
4)



< liter

> liter

5)



< liter

> liter

6)



< liter

> liter

7)



< liter

> liter


8)



< liter

> liter

9)



< liter

> liter