








Name: _____

Date: _____

Measuring Capacity

Write answers in ml

1. 	2. 	3. 	4. 	5. 	6. 
400 ml	500 ml	150 ml	1 L	250 ml	200 ml







	+		
	+		
	+		
	+		
	+		
	+		

Name: _____

Date: _____

Measuring Capacity

Write answers in ml

1. 	2. 	3. 	4. 	5. 	6. 
400 ml	500 ml	150 ml	1 L	250 ml	200 ml

 + 	$200 \text{ ml} + 1 \text{ L} = 1200 \text{ ml}$
 + 	$400 \text{ ml} + 500 \text{ ml} = 900 \text{ ml}$
 + 	$150 \text{ ml} + 200 \text{ ml} = 350 \text{ ml}$
 + 	$250 \text{ ml} + 250 \text{ ml} = 500 \text{ ml}$
 + 	$500 \text{ ml} + 150 \text{ ml} = 650 \text{ ml}$
 + 	$250 \text{ ml} + 1 \text{ L} = 1250 \text{ ml}$