







Name: \_\_\_\_\_

Date: \_\_\_\_\_

# Measuring Capacity

Write answers in ml

|  |  |  |   |  |  |
|--|--|--|---|--|--|
| 1.  | 2.  | 3.  | 4.  | 5.  | 6.  |
| 400 ml   | 500 ml   | 150 ml   | 1 L   | 250 ml   | 200 ml   |







|   |  |
|---|--|
|  +      |  |
|  +    |  |
|  +  |  |
|  +  |  |
|  +  |  |
|  +  |  |

Name: \_\_\_\_\_

Date: \_\_\_\_\_

# Measuring Capacity

Write answers in ml

|  |  |  |   |  |  |
|--|--|--|---|--|--|
| 1.  | 2.  | 3.  | 4.  | 5.  | 6.  |
| 400 ml   | 500 ml   | 150 ml   | 1 L   | 250 ml   | 200 ml   |

|   |  |
|---|--|
|  +      | $150 \text{ ml} + 250 \text{ ml} = 400 \text{ ml}$ |
|  +    | $1 \text{ L} + 500 \text{ ml} = 1500 \text{ ml}$   |
|  +  | $250 \text{ ml} + 200 \text{ ml} = 450 \text{ ml}$ |
|  +  | $400 \text{ ml} + 500 \text{ ml} = 900 \text{ ml}$ |
|  +  | $200 \text{ ml} + 200 \text{ ml} = 400 \text{ ml}$ |
|  +  | $400 \text{ ml} + 1 \text{ L} = 1400 \text{ ml}$   |