

Which Holds More?

Name: _____

Date: _____

Circle the set that holds more.



2 cups

=



1 pint



or



or



or



or



or



Which Holds More?


Name: _____

Date: _____



Circle the set that holds more.




or



or



or



or



or

