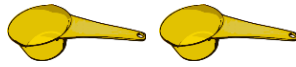


Which Holds More?

Name: _____

Date: _____

Circle the set that holds more.



2 spoons

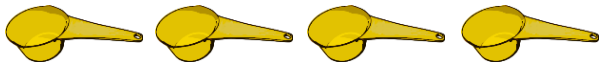
=



1 cup



or



or



or



or



or

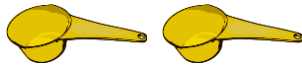


Which Holds More?

Name: _____

Date: _____

Circle the set that holds more.

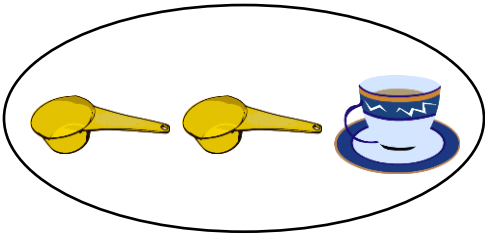


2 spoons

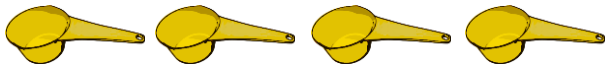
=




1 cup




or




or



or



or



or

