

Name: _____

Date: _____

Clock Riddle

Write the time displayed below for each clock. Write the letter inside each box to solve the riddle.




:
 :



:
 :



:
 :



:
 :



:
 :



:
 :




:
 :



:
 :



:
 :



:
 :



:
 :

Key:

a	e	h	p	r	s	t	y
2	3	5	9	7	6	4	1

Name: _____

Date: _____

Clock Riddle

Write the time displayed below for each clock. Write the letter inside each box to solve the riddle.




:



:



:



:



:



:



:



:



:



:



:

Key:

a	e	h	p	r	s	t	y
2	3	5	9	7	6	4	1