

Name: _____

Date: _____

Clock Riddle

Write the time displayed below for each clock. Write the letter inside each box to solve the riddle.



:
 :



:
 :



:
 :



:
 :



:
 :



:
 :



:
 :



:
 :



:
 :




:
 :




:
 :



:
 :



:
 :



:
 :

Key:

a	e	h	l	n	o	p	w	y
1	4	6	5	9	7	3	2	8

Name: _____

Date: _____

Clock Riddle

Write the time displayed below for each clock. Write the letter inside each box to solve the riddle.



6 : 0 0
h



1 : 0 0
a



3 : 0 0
p



3 : 0 0
p



8 : 0 0
y




6 : 0 0
h



1 : 0 0
a



5 : 0 0
l



5 : 0 0
l



7 : 0 0
o




2 : 0 0
w



4 : 0 0
e



4 : 0 0
e



9 : 0 0
n

Key:

a	e	h	l	n	o	p	w	y
1	4	6	5	9	7	3	2	8