

Name: _____

Date: _____

Clock Riddle

Write the time displayed below for each clock. Write the letter inside each box to solve the riddle.



: ____



: ____



: ____



: ____



: ____



: ____




: ____



: ____



: ____



: ____

Key:

a	d	h	i	p	y
8	3	2	4	5	1

Name: _____

Date: _____

Clock Riddle

Write the time displayed below for each clock. Write the letter inside each box to solve the riddle.



: 0 0



: 3 0



: 0 0



: 3 0




: 0 0



: 3 0




: 0 0



: 3 0



: 0 0



: 3 0

Key:

a	d	h	i	p	y
8	3	2	4	5	1