

Name: \_\_\_\_\_

Date: \_\_\_\_\_

### Clock Riddle

Write the time displayed below for each clock. Write the letter inside each box to solve the riddle.



— :   —



— :   — —



— :  —



— :   : — —




— :  — —



: — — —



— :  —



: — — —



: — — —



— :  —




: — — —




: — — —



— : —



: — — —



— :  —



: — — —



: — — —

Key:

a	g	h	i	k	n	p	s	t	v	y
9	7	5	0	2	6	1	8	3	11	4

Name: \_\_\_\_\_

Date: \_\_\_\_\_

### Clock Riddle

Write the time displayed below for each clock. Write the letter inside each box to solve the riddle.



3 : 5 0  
h




9 : 2 5  
a



6 : 1 5  
p



1 : 0 0  
p



4 : 3 0  
y



3 : 4 0  
t



1 : 5 0  
h




9 : 0 0  
a



6 : 2 0  
n




5 : 2 5  
k




8 : 1 0  
s




7 : 4 5  
g



2 : 2 0  
i



11 : 0 0  
v



3 : 0 0  
i



6 : 5 0  
n



7 : 3 0  
g

Key:

a	g	h	i	k	n	p	s	t	v	y
9	7	5	0	2	6	1	8	3	11	4