


Name: _____


Date: _____

Clock Riddle


Write the time displayed below for each clock. Write the letter inside each box to solve the riddle.




— : —



: — —




: — —




: — —




: — —




— : —



: — —



: — —



: — —

Key:


| | | | | | | | | |
|---|---|---|---|---|----|---|---|---|
| a | f | h | i | m | n | s | t | u |
| 7 | 2 | 4 | 5 | 0 | 11 | 3 | 9 | 1 |

Name: _____


Date: _____

Clock Riddle


Write the time displayed below for each clock. Write the letter inside each box to solve the riddle.




6 :



: 3 0




: 0 0




: 3 0




: 0 0




8 : 0



: 0 0



: 3 0



: 0 0

Key:

| | | | | | | | | |
|---|---|---|---|---|----|---|---|---|
| a | f | h | i | m | n | s | t | u |
| 7 | 2 | 4 | 5 | 0 | 11 | 3 | 9 | 1 |