

Name: \_\_\_\_\_

Date: \_\_\_\_\_

### Clock Riddle

Write the time displayed below for each clock. Write the letter inside each box to solve the riddle.



:




:



:



:



:



:



:



:



:




:



:



:



:



:

Key:

a	c	e	h	i	m	r	s	t	y
7	3	9	8	2	4	6	5	0	1

### Clock Riddle

Write the time displayed below for each clock. Write the letter inside each box to solve the riddle.



:



:



:



:



:



:




:



:



:




:



:



:



:



:

Key:

a	c	e	h	i	m	r	s	t	y
7	3	9	8	2	4	6	5	0	1