


Name: _____

Date: _____

Minute Hand


Draw the minute hand for each clock.

1.



12:50

2.




2:20

3.




3:40

4.



9:10

5.



1:50

6.




11:10

7.




10:40

8.



6:20

9.



8:30

Name: _____

Date: _____

Minute Hand


Draw the minute hand for each clock.

1.




12:50

2.




2:20

3.



3:40

4.



9:10

5.




1:50

6.




11:10

7.




10:40

8.



6:20

9.



8:30