

Name: _____

Date: _____


Before and After

Write the times for before and after for each clock.


One Hour Before

One Hour After


1.




2.




3.




4.



5.



6.



Name: _____

Date: _____

Before and After


Write the times for before and after for each clock.

One Hour Before

One Hour After

1.


3:00



5:00

2.


1:00



3:00

3.


11:00



1:00

4.


2:00



4:00

5.


10:00



12:00

6.

8:00



10:00