

Name: _____

Date: _____


Before and After

Write the times for before and after for each clock.


One Hour Before

One Hour After


1.




2.




3.




4.



5.



6.



Name: _____

Date: _____

Before and After


Write the times for before and after for each clock.

One Hour Before

One Hour After

1.


11:00



1:00

2.


9:00



11:00

3.


12:00



2:00

4.


2:00



4:00

5.


7:00



9:00

6.

3:00



5:00