

Name: _____

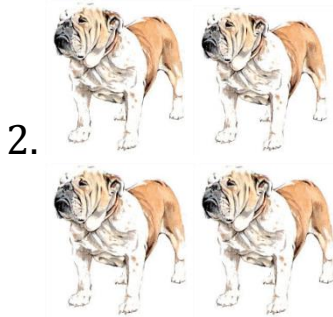
Date: _____

How many? (# 1-10, rectangular array)

Directions: Write how many animals of each type there are in the blanks on the right.

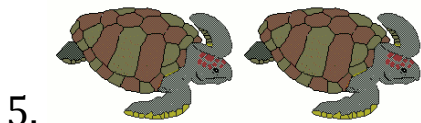


How many?









Answer Key

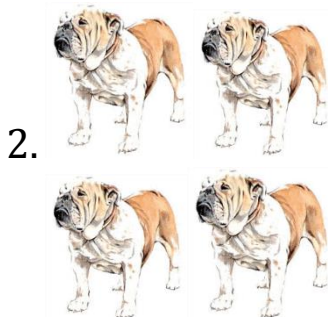
How many? (# 1-10, rectangular array)

Directions: Write how many animals of each type there are in the blanks on the right.


How many?



10



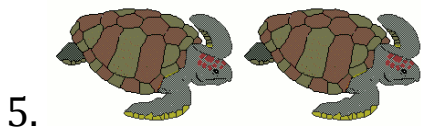
4



8



6



2